












Name:	Date:
<p>1 Helen bought a £2.90 sandwich, a 63 pence pear and a 48 pence biscuit for her lunch. How much did she spend in total?</p> 	 MNU 403a Bronze Outcome 1
<p>2 Steph runs a greetings cards business from home. She is making a border on a card and has a 40 cm piece of ribbon. She makes a 9.8 cm cut followed by a 15.73 cm cut. How long is the remaining piece of ribbon?</p> 	 MNU 403a Silver Outcome 1
<p>3 Slush Puppies are poured from a 90 litre Slushie machine. Each Slush Puppy contains 330 ml. How many Slush Puppies can be made from a full Slushie machine?</p> 	 MNU 403a Gold Outcome 1 
<p>4 Calculate</p> 402×56	 MNU 403a Silver Outcome 2
<p>5 Calculate</p> $1037 \div 17$	 MNU 403a Bronze Outcome 3
My score:	



Exam Questions

Question 1:

Carry out the following calculations.

(a) $2.73 + 7.6 - 8.4$ 1

(b) 13×7000 1

(c) $56.5 \div 500$ 1

(d) 30% of 92 litres 2



MNU 303a Gold Outcome 1

MNU 303a Silver Outcome 3

MNU 303a Gold Outcome 4

MNU 307a Silver Outcome 3

Question 2:

The children at Farmfield School are collecting money for charity.

Their target is to collect £360

So far they have collected £57.73



How much **more** money do they need to reach their target? 1



MNU 403a Bronze Outcome 1

Question 3:

Circle two numbers that add together to equal 0.25

0.05 0.23 0.2 0.5

1



You're on your own!

Question 4:

Lara chooses a number less than 20

She divides it by 2 and then adds 6

She then divides this result by 3

Her answer is 4.5

What was the number she started with? 2



You're on your own!

Question 5:

Write in the missing number.

$8.5 + 14.7 = 10.2 + \boxed{}$

1



You're on your own!

My score: