









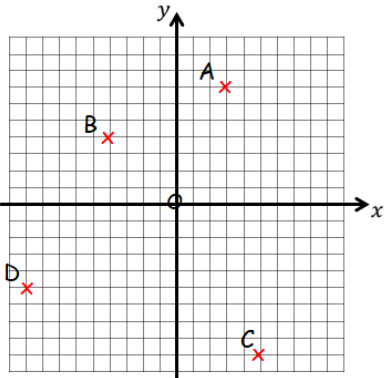




Name:		Date:	
1 Calculate		 MNU 203a Bronze Outcomes 1-4	
$\begin{array}{r} 265 \\ + 14 \\ \hline \end{array}$	$\begin{array}{r} 723 \\ - 302 \\ \hline \end{array}$	$\begin{array}{r} 5142 \\ \times 2 \\ \hline \end{array}$	$\begin{array}{r} 3 \overline{) 606} \\ \underline{6} \\ 0 \\ \underline{0} \\ 6 \\ \underline{6} \\ 0 \end{array}$
2 Write nine thousand, four hundred and three in words.		 MNU 202a Bronze Outcome 1	
3 Calculate;		 MNU 203b Bronze Outcomes 3 & 4	
(a) 4×6 (b) $35 \div 5$			
4 Part of a number line is shown below.		 MNU 204a Bronze Outcome 1	
$\begin{array}{ccccccc} & & & & & & \\ -4 & -3 & ? & -1 & 0 & 1 & 2 & 3 \end{array}$ <p>What is the missing number?</p>			
5 Round 87 to the nearest 10.		 MNU 201a Bronze Outcome 1	
My score:			



Name: _____		Date: _____	
1 Calculate		 MNU 203a Silver Outcomes 1-4	
$\begin{array}{r} 6049 \\ + 783 \\ \hline \end{array}$	$\begin{array}{r} 486 \\ - 78 \\ \hline \end{array}$	$\begin{array}{r} 7694 \\ \times 8 \\ \hline \end{array}$	$\begin{array}{r} 6 \overline{) 918} \\ \underline{6} \\ 31 \\ \underline{30} \\ 10 \\ \underline{10} \\ 0 \end{array}$
2 Write 9 kilometres and 50 metres as kilometres.		 MNU 202a Gold Outcome 3	
3 Calculate		 MNU 204a Gold Outcomes 2 & 3	
(a) $8 - 10$ (b) -3×7			
4 Round 624 to the nearest 10.		 MNU 201a Silver Outcome 1	
5 Write down the coordinates of the points on the grid below.		 MTH 218a Silver Outcome 1	
			
My score: _____			