










Name:		Date:	
1 Calculate		 MNU 203a Bronze Outcomes 1-4	
$\begin{array}{r} 514 \\ + 61 \\ \hline \end{array}$	$\begin{array}{r} 573 \\ - 141 \\ \hline \end{array}$	$\begin{array}{r} 3201 \\ \times 4 \\ \hline \end{array}$	$\begin{array}{r} 2 \overline{) 28} \\ \underline{2} \\ 0 \\ \hline \end{array}$
2 Write 4 metres and 30 centimetres as metres.		 MNU 202a Bronze Outcome 3	
3 Subtract the following MENTALLY; $9.8 - 4.2$		 MNU 203b Bronze Outcome 2	
4 What fraction of the shape below has been shaded?		 MNU 207a Bronze Outcome 1	
			
5 What is the name of this 2D shape? How many sides does it have? How many vertices does it have?		 MTH 216a Bronze Outcome 1	
			
My score:			



Name:		Date:	
<p> Calculate</p> $\begin{array}{r} 729 \\ + 47 \\ \hline \end{array}$ $\begin{array}{r} 5734 \\ - 2076 \\ \hline \end{array}$ $\begin{array}{r} 673 \\ \times 6 \\ \hline \end{array}$ $\begin{array}{r} 8 \overline{) 824} \\ \underline{8} \\ 2 \\ \underline{2} \\ 0 \end{array}$		<p> MNU 203a Silver Outcomes 1-4</p>	
<p> Write 4 395 182 in words.</p>		<p> MNU 202a Gold Outcome 2</p>	
<p> Calculate</p> <p>(a) $-6 - 3$</p> <p>(b) $4 \times (-7)$</p>		<p> MNU 204a Gold Outcomes 2 & 3</p>	
<p> Georgia has £30 in her bank account. She then buys a top for £15 and a bag for £40. What does her new bank balance show?</p> 		<p> MNU 204a Silver Outcome 3</p>	
<p> Calculate 10% of 60 kilograms.</p> 		<p> MNU 207a Gold Outcome 3</p>	
My score:			