










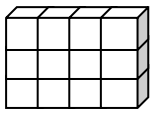







Name:		Date:	
<p> Calculate</p> <div style="display: flex; justify-content: space-around; align-items: flex-end;"> <div style="text-align: center;"> <math display="block">\begin{array}{r} 62 \\ + 17 \\ \hline \end{array}</math> </div> <div style="text-align: center;"> <math display="block">\begin{array}{r} 753 \\ - 241 \\ \hline \end{array}</math> </div> <div style="text-align: center;"> <math display="block">\begin{array}{r} 73 \\ \times 3 \\ \hline \end{array}</math> </div> <div style="text-align: center;"> <math display="block">\begin{array}{r} 2 \overline{) 4802} \end{array}</math> </div> </div>		<p> MNU 203a Bronze Outcomes 1-4</p>	
<p> Add the following MENTALLY;</p> <p style="text-align: center;"><math>4.1 + 3.8</math></p>		<p> MNU 203b Bronze Outcome 1</p>	
<p> Pierre has £1380 but has to pay his council tax and phone bill.</p> <div style="display: flex; align-items: center;"> <div style="border: 1px solid black; padding: 5px; margin-right: 10px;"> <p><b>Council Tax</b></p> <p>Due Now</p> <p>£125</p>  </div> <div style="border: 1px solid black; padding: 5px; margin-right: 10px;"> <p><b>Phone Bill</b></p> <p>Outstanding</p> <p>£39</p>  </div>  </div> <p>Once he has paid these bills, how much does he have left to spend for the rest of the month?</p>		<p> MNU 209b Bronze Outcome 2</p> <div style="text-align: right;"></div>	
<p> Calculate the volume of this shape. (Each cube measures 1 cm by 1 cm by 1 cm)</p> <div style="text-align: center;">  </div>		<p> MNU 211c Bronze Outcome 3</p>	
<p> The temperature one day was 6°C.</p> <p>Overnight, the temperature dropped by 12°C.</p> <p>What is the new temperature?</p>		<p> MNU 204a Bronze Outcome 2</p>	
My score:			



<b>Name:</b>	<b>Date:</b>																								
<div style="display: flex; justify-content: space-between; align-items: flex-start;"> <div style="width: 45%;"> <p><b>1</b> Calculate</p> <div style="display: flex; justify-content: space-around; margin-top: 20px;"> <div style="text-align: center;"> <math display="block">\begin{array}{r} 6957 \\ + 784 \\ \hline \end{array}</math> </div> <div style="text-align: center;"> <math display="block">\begin{array}{r} 234 \\ - 57 \\ \hline \end{array}</math> </div> <div style="text-align: center;"> <math display="block">\begin{array}{r} 563 \\ \times 7 \\ \hline \end{array}</math> </div> </div> <div style="width: 45%; margin-top: 20px;"> <div style="border: 1px solid black; padding: 5px; display: inline-block;"> 5    4   4   5 </div> </div> </div> </div>	<div style="display: flex; align-items: center;">  MNU 203a Silver Outcomes 1-4 </div>																								
<div style="display: flex; align-items: center;"> <div style="width: 45%;"> <p><b>2</b> Solve the following equation.</p> <math display="block">r - 8 = 2</math> </div> <div style="width: 45%;"></div> </div>	<div style="display: flex; align-items: center;">  MTH 215a Gold Outcome 1 </div>																								
<div style="display: flex; align-items: center;"> <div style="width: 45%;"> <p><b>3</b> Calculate the size of the missing angle in the triangle.</p> <div style="text-align: center; margin-top: 20px;"> </div> </div> <div style="width: 45%;"></div> </div>	<div style="display: flex; align-items: center;">  MTH 217a Gold Outcome 3 </div>																								
<div style="display: flex; align-items: flex-start;"> <div style="width: 45%;"> <p><b>4</b> Look at the map below.</p> <div style="text-align: center; margin-top: 20px;"> </div> <p>What is the direction of travel from Finland to Norway?</p> </div> <div style="width: 45%;"></div> </div>	<div style="display: flex; align-items: center;">  MTH 217c Silver Outcome 2 </div>																								
<div style="display: flex; align-items: flex-start;"> <div style="width: 45%;"> <p><b>5</b> How much does it cost for a block of cheese, a packet of biscuits, and a bag of sugar from CostSmart?</p> </div> <div style="width: 45%; margin-top: 20px;"> <div style="border: 1px solid black; padding: 5px;"> <p style="text-align: center; color: blue; font-weight: bold;">CostSmart!</p> <table style="width: 100%; text-align: center;"> <tr> <td></td> <td></td> <td></td> </tr> <tr> <td>Biscuits</td> <td>Cola</td> <td>Sugar</td> </tr> <tr> <td>79p</td> <td>63p</td> <td>£1.48</td> </tr> <tr> <td>per packet</td> <td>per can</td> <td>per packet</td> </tr> <tr> <td></td> <td></td> <td></td> </tr> <tr> <td>Apples</td> <td>Eggs</td> <td>Cheese</td> </tr> <tr> <td>£1.37</td> <td>£2.52</td> <td>£1.68</td> </tr> <tr> <td>per bag</td> <td>per dozen</td> <td>per block</td> </tr> </table> </div> </div> </div>				Biscuits	Cola	Sugar	79p	63p	£1.48	per packet	per can	per packet				Apples	Eggs	Cheese	£1.37	£2.52	£1.68	per bag	per dozen	per block	<div style="display: flex; align-items: center;">  MNU 209a Gold Outcome 1 </div>
Biscuits	Cola	Sugar																							
79p	63p	£1.48																							
per packet	per can	per packet																							
Apples	Eggs	Cheese																							
£1.37	£2.52	£1.68																							
per bag	per dozen	per block																							
<b>My score:</b>																									