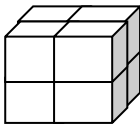
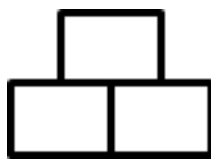




















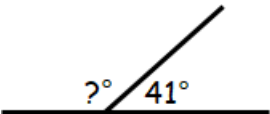








Name:		Date:																			
<p><b>1</b> Calculate</p> $\begin{array}{r} 827 \\ + 141 \\ \hline \end{array}$ $\begin{array}{r} 457 \\ - 125 \\ \hline \end{array}$ $\begin{array}{r} 50 \\ \times 7 \\ \hline \end{array}$ $\begin{array}{r} 2 \overline{) 68} \end{array}$		<p>MNU 203a Bronze Outcomes 1-4</p>																			
<p><b>2</b> Calculate the volume of this shape. (Each cube measures 1 cm by 1 cm by 1 cm)</p> 		<p>MNU 211c Bronze Outcome 3</p>																			
<p><b>3</b> Calculate;</p> <p>(a) <math>5 \times 9</math></p> <p>(b) <math>16 \div 4</math></p>		<p>MNU 203b Bronze Outcomes 3 &amp; 4</p>																			
<p><b>4</b> Shade <math>\frac{1}{3}</math> of the picture in the box opposite.</p>		<p>MNU 207a Bronze Outcome 2</p> 																			
<p><b>5</b> If you buy an electric sharpener, a pack of coloured pencils and a fountain pen, how much change would you receive from £20?</p>		<p>MNU 209a Bronze Outcome 2</p>																			
<div style="display: flex; align-items: center;"> <div style="flex: 1;"> <p><b>The Pencil Store</b> Great Low Prices!</p> <table border="1"> <tr> <td></td> <td></td> <td></td> </tr> <tr> <td>Electric Sharpeners</td> <td>Pencils</td> <td>Crayons</td> </tr> <tr> <td>£9 each</td> <td>£2 per pack</td> <td>£4 per pack</td> </tr> <tr> <td></td> <td></td> <td></td> </tr> <tr> <td>Coloured Pencils</td> <td>A4 Paper</td> <td>Fountain Pens</td> </tr> <tr> <td>£3 per pack</td> <td>£5 per pack</td> <td>£2 each</td> </tr> </table> </div> <div style="flex: 1; margin-left: 10px;"> <p>My score:</p> </div> </div>							Electric Sharpeners	Pencils	Crayons	£9 each	£2 per pack	£4 per pack				Coloured Pencils	A4 Paper	Fountain Pens	£3 per pack	£5 per pack	£2 each
																					
Electric Sharpeners	Pencils	Crayons																			
£9 each	£2 per pack	£4 per pack																			
																					
Coloured Pencils	A4 Paper	Fountain Pens																			
£3 per pack	£5 per pack	£2 each																			



Name:		Date:	
<b>1</b> Calculate		 MNU 203a Gold Outcomes 1-4	
$\begin{array}{r} 72 \cdot 54 \\ + 9 \cdot 32 \\ \hline \\ \hline \end{array}$	$\begin{array}{r} 36 \cdot 65 \\ - 6 \cdot 49 \\ \hline \\ \hline \end{array}$	$\begin{array}{r} 38 \cdot 97 \\ \times 6 \\ \hline \\ \hline \end{array}$	$\begin{array}{r} 4 \overline{) 3448} \\ \underline{4} \phantom{00} \\ 34 \phantom{00} \\ \underline{32} \phantom{00} \\ 24 \phantom{00} \\ \underline{24} \phantom{00} \\ 0 \phantom{00} \end{array}$
<b>2</b> Calculate the size of the missing angle.		 MTH 217a Gold Outcome 2	
			
<b>3</b> A hot air balloon travels 70 miles over a 7 hour time period. What was its average speed?		 MNU 210c Gold Outcome 3	
			
<b>4</b> Solve the following equation.		 MTH 215a Gold Outcome 1	
$t + 6 = 14$			
<b>5</b> Calculate		 MNU 204a Gold Outcomes 1 & 4	
(a) $-1 + 7$			
(b) $-45 \div 9$			
My score:			