





















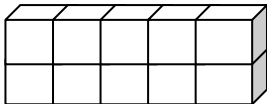




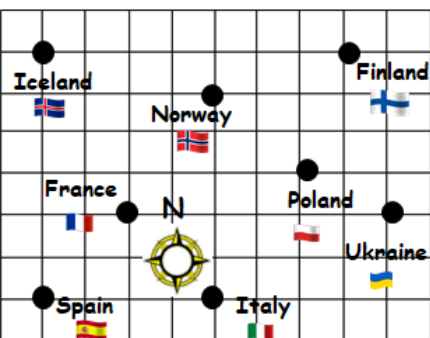










Name:		Date:																
<p><b>1</b> Calculate</p> $\begin{array}{r} 6284 \\ + 2503 \\ \hline \end{array}$ $\begin{array}{r} 786 \\ - 24 \\ \hline \end{array}$ $\begin{array}{r} 3021 \\ \times 4 \\ \hline \end{array}$ $\begin{array}{r} 3 \overline{) 6309} \end{array}$		<p> MNU 203a Bronze Outcomes 1-4</p>																
<p><b>2</b> Calculate</p> $32 \div 8 - 1$		<p> MTH 203c Bronze Outcome 1</p>																
<p><b>3</b> How much does it cost for a tennis racket and a trophy?</p>		<p> MNU 209a Bronze Outcome 1</p>																
		 <table border="1"> <thead> <tr> <th colspan="3">Direct Sports! Everything Reduced!</th> </tr> </thead> <tbody> <tr> <td></td> <td></td> <td></td> </tr> <tr> <td>Footballs £7 each</td> <td>Tennis rackets £17 each</td> <td>Basketball nets £20 each</td> </tr> <tr> <td></td> <td></td> <td></td> </tr> <tr> <td>Trophies £6 each</td> <td>Basketballs £9 each</td> <td>Stop-watches £2 each</td> </tr> </tbody> </table>		Direct Sports! Everything Reduced!						Footballs £7 each	Tennis rackets £17 each	Basketball nets £20 each				Trophies £6 each	Basketballs £9 each	Stop-watches £2 each
Direct Sports! Everything Reduced!																		
																		
Footballs £7 each	Tennis rackets £17 each	Basketball nets £20 each																
																		
Trophies £6 each	Basketballs £9 each	Stop-watches £2 each																
<p><b>4</b> Calculate the volume of this shape. (Each cube measures 1 cm by 1 cm by 1 cm)</p> 		<p> MNU 211c Bronze Outcome 3</p>																
<p><b>5</b> What is the name of this 2D shape? How many sides does it have? How many vertices does it have?</p> 		<p> MTH 216a Bronze Outcome 1</p>																
My score:																		



Name:		Date:	
<p><b>1</b> Calculate</p> $\begin{array}{r} 3872 \\ + 468 \\ \hline \end{array}$ $\begin{array}{r} 376 \\ - 186 \\ \hline \end{array}$ $\begin{array}{r} 68 \\ \times 3 \\ \hline \end{array}$ <div style="border: 1px solid black; padding: 5px; display: inline-block;">2 6 1 9 4</div>		<p> MNU 203a Silver Outcomes 1-4</p>	
<p><b>2</b> Look at the map below.</p>  <p>What is the direction of travel from Italy to France?</p>		<p> MTH 217c Silver Outcome 2</p>	
<p><b>3</b> Which of these numbers are multiples of 15?</p> <p>40, 55, 60, 85, 90</p>		<p> MTH 205a Silver Outcome 1</p>	
<p><b>4</b> Calculate <math>\frac{1}{4}</math> of 36 miles.</p> 		<p> MNU 207a Gold Outcome 2</p>	
<p><b>5</b> Grandpa Joe lives 12 miles from the town centre.</p> <p>How long would it take him to get there if he travelled at an average speed of 6 miles per hour in his electric scooter?</p> 		<p> MNU 210c Gold Outcome 4</p>	
My score:			