



















Name:		Date:	
<p><b>1</b> Calculate</p> $\begin{array}{r} 535 \\ + 123 \\ \hline \end{array}$ $\begin{array}{r} 53 \\ - 41 \\ \hline \end{array}$ $\begin{array}{r} 71 \\ \times 5 \\ \hline \end{array}$ $\begin{array}{r} 2 \overline{) 442} \end{array}$		<p> MNU 203a Bronze Outcomes 1-4</p>	
<p><b>2</b> Write two thousand, four hundred and sixteen as a number.</p>		<p> MNU 202a Bronze Outcome 1</p>	
<p><b>3</b> Write 9 metres and 40 centimetres as metres.</p> 		<p> MNU 202a Bronze Outcome 3</p>	
<p><b>4</b> Add the following MENTALLY;</p> $5.3 + 2.6$		<p> MNU 203b Bronze Outcome 1</p>	
<p><b>5</b> Calculate;</p> <p>(a) <math>2 \times 3</math></p> <p>(b) <math>20 \div 5</math></p>		<p> MNU 203b Bronze Outcomes 3 &amp; 4</p>	
My score:			



Name:		Date:	
 Calculate		 MNU 203a Gold Outcomes 1-4	
$\begin{array}{r} 84 \cdot 27 \\ + 6 \cdot 41 \\ \hline \end{array}$	$\begin{array}{r} 69 \cdot 58 \\ - 5 \cdot 29 \\ \hline \end{array}$	$\begin{array}{r} 45 \cdot 97 \\ \times 9 \\ \hline \end{array}$	$\begin{array}{r} 2 \overline{) 2994} \\ \underline{2} \phantom{00} \\ 9 \phantom{00} \\ \underline{18} \phantom{00} \\ 19 \phantom{00} \\ \underline{18} \phantom{00} \\ 14 \phantom{00} \\ \underline{14} \phantom{00} \\ 0 \end{array}$
 Write 8 506 290 in words.		 MNU 202a Gold Outcome 2	
 Write 5 kilometres and 3 metres as kilometres.		 MNU 202a Gold Outcome 3	
 Calculate (a) $70 \times 10$ (b) $32\,000 \div 10$		 MNU 203b Gold Outcomes 1 & 2	
 Calculate $86 \times 30$		 MNU 203b Gold Outcome 3	
My score:			