




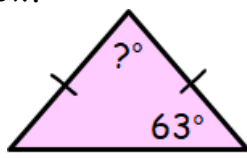





| | |
|---|--|
| Name: _____ | Date: _____ |
| <div style="display: flex; justify-content: space-between; align-items: flex-start;"> <div style="width: 45%;"> <p>1 Calculate</p> <div style="display: flex; justify-content: space-around; margin-top: 20px;"> <div style="text-align: center;"> $\begin{array}{r} 98 \cdot 27 \\ + 36 \cdot 48 \\ \hline \\ \hline \end{array}$ </div> <div style="text-align: center;"> $\begin{array}{r} 26 \cdot 42 \\ - 19 \cdot 84 \\ \hline \\ \hline \end{array}$ </div> <div style="text-align: center;"> $\begin{array}{r} 26 \cdot 38 \\ \times \quad 7 \\ \hline \\ \hline \end{array}$ </div> <div style="text-align: center;"> $\begin{array}{r} 3 \overline{) 1446} \\ \underline{3} \\ 14 \\ \underline{12} \\ 26 \\ \underline{24} \\ 26 \\ \underline{24} \\ 26 \\ \underline{24} \\ 26 \end{array}$ </div> </div> </div> <div style="width: 50%;"> <p>MNU 303a Bronze Outcomes 1-4</p> </div> </div> | |
| <p>2 Calculate</p> <p>(a) $6 - 8$</p> <p>(b) -4×9</p> | <p>MNU 304a Bronze Outcomes 2 & 3</p> |
| <p>3 Write down the coordinates of the points on the grid below.</p> <div style="text-align: center; margin-top: 20px;"> </div> | <p>MTH 318a Bronze Outcome 1</p> |
| <p>4 Calculate 20% of £30.</p> <div style="text-align: right; margin-top: 20px;"> </div> | <p>MNU 307a Bronze Outcome 3</p> |
| <p>5 Complete the shape opposite so that the vertical line is a line of symmetry.</p> | <p>MTH 319a Bronze Outcome 2</p> <div style="text-align: center; margin-top: 20px;"> </div> |
| My score: _____ | |



| Name: | Date: |
|--|---|
| 1 Calculate $36 \div (4 + 2)$ |  MNU 203c Silver Outcome 1 |
| 2 Calculate $\frac{5}{6}$ of 36 grams.  |  MNU 307a Silver Outcome 2 |
| 3 Simplify (a) $2g - 5h + g - 4h$ (b) $7m \times 2n$ |  MTH 314a Silver Outcome 1 |
| 4 Calculate 0.048×900 |  MNU 303b Gold Outcome 3 |
| 5 Calculate the size of the missing angle in the triangle below.  |  MTH 317a Silver Outcome 3 |
| My score: | |