




























<b>Name:</b>	<b>Date:</b>
<div style="display: flex; justify-content: space-between; align-items: flex-start;"> <div style="width: 45%;"> <p> <b>1 Calculate</b></p> <div style="display: flex; justify-content: space-around; margin-top: 20px;"> <div style="text-align: center;"> <math display="block">\begin{array}{r} 72 \cdot 64 \\ + 15 \cdot 83 \\ \hline \end{array}</math> </div> <div style="text-align: center;"> <math display="block">\begin{array}{r} 48 \cdot 39 \\ - 7 \cdot 65 \\ \hline \end{array}</math> </div> <div style="text-align: center;"> <math display="block">\begin{array}{r} 7 \cdot 83 \\ \times 2 \\ \hline \end{array}</math> </div> <div style="text-align: center;"> <math display="block">9 \overline{) 77 \cdot 13}</math> </div> </div> </div> <div style="width: 50%; text-align: right;"> <p> <b>MNU 303a Bronze Outcomes 1-4</b></p> </div> </div>	
<p> <b>2 Solve the following equation.</b></p> <p style="text-align: center; margin-top: 20px;"><math>5x + 9 = 44</math></p>	<p> <b>MTH 315a Bronze Outcome 3</b></p>
<p> <b>3 Calculate the size of the missing angle.</b></p> <div style="text-align: center; margin-top: 20px;"> </div>	<p> <b>MTH 317a Bronze Outcome 2</b></p>
<p> <b>4 Express 35 as a product of prime factors.</b></p>	<p> <b>MTH 305b Bronze Outcome 2</b></p>
<p> <b>5 Calculate 10% of £6.</b></p> <div style="text-align: right; margin-top: 20px;"> </div>	<p> <b>MNU 307a Bronze Outcome 3</b></p>
<b>My score:</b>	



Name:		Date:																
<div>1</div> <div>Change €11.20 into pounds and pence using the exchange rate provided.</div> <div>Exchange Rate:- £1 = €1.17</div> <div></div>		<div> MNU 309a Silver Outcome 4</div>																
<div>2</div> <div>Write down the first 5 multiples of 73.</div>		<div> MTH 305a Gold Outcome 1</div>																
<div>3</div> <div>How much will it cost to buy 2 choc ices, 3 scones and 2 tins of soup from CostSmart?</div> <div><table><tr><th colspan="3">CostSmart!</th></tr><tr><td></td><td></td><td></td></tr><tr><td>Popcorn £1.53 per packet</td><td>Soup 76p per tin</td><td>Choc Ices 95p each</td></tr><tr><td></td><td></td><td></td></tr><tr><td>Cones £1.45 each</td><td>Scones 89p each</td><td>Onions 28p each</td></tr></table></div>		CostSmart!						Popcorn £1.53 per packet	Soup 76p per tin	Choc Ices 95p each				Cones £1.45 each	Scones 89p each	Onions 28p each	<div> MNU 309b Silver Outcome 1</div>	
CostSmart!																		
																		
Popcorn £1.53 per packet	Soup 76p per tin	Choc Ices 95p each																
																		
Cones £1.45 each	Scones 89p each	Onions 28p each																
<div>4</div> <div>What is the probability of scoring more than 12 on a dartboard numbered 1-20?</div> <div>Give your answer as a fraction in its simplest form.</div> <div></div>		<div> MNU 322a Gold Outcome 2</div>																
<div>5</div> <div>Express 85% as a fraction in its simplest form.</div>		<div> MNU 307a Gold Outcome 1</div>																
My score:																		