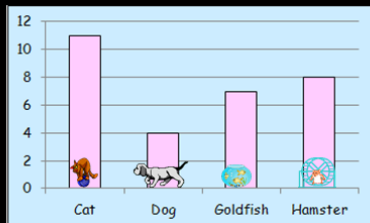


Outcome 1 - Interpreting Bar Graphs

Bronze examples

Example...

A P5 class were asked to about their favourite pets. Their results were listed in the bar graph below.



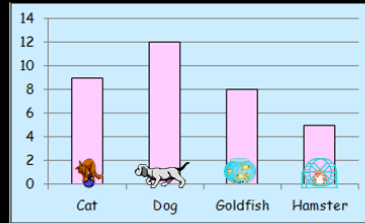
How many pupils preferred dogs? **4 pupils**

How many pupils preferred cats? **11 pupils**

Silver example

Example...

A P5 class were asked to about their favourite pets. Their results were listed in the bar graph below.

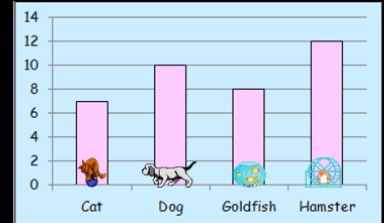


How many more pupils prefer dogs than hamsters?
 $12 - 5 = 7$ pupils

Gold example

Example...

A P5 class were asked to about their favourite pets. Their results were listed in the bar graph below.

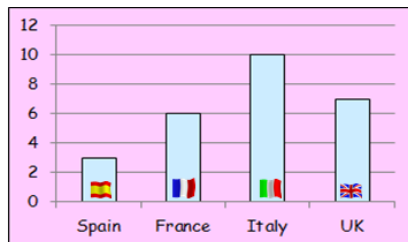


How many pupils were asked altogether?

$$7 + 10 + 8 + 12 = 37 \text{ pupils}$$

Bronze Questions

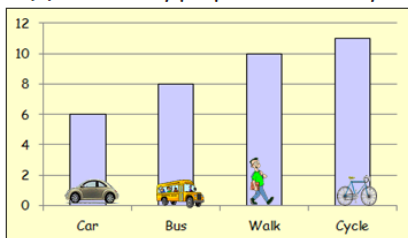
1



(a) How many people went to Spain?

(b) How many people went to Italy?

2

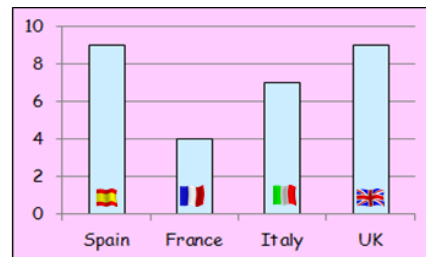


(a) How many pupils took the bus?

(b) How many pupils cycled?

Silver Questions

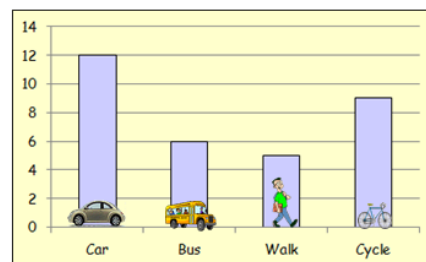
1



(a) How many more people went to Spain than Italy?

(b) How many more people went to UK than France?

2

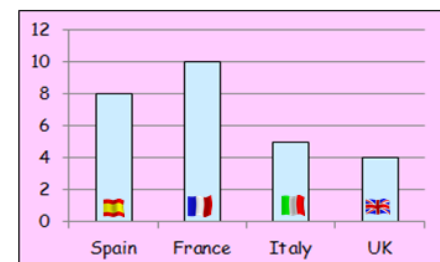


(a) How many more pupils cycled instead of walking?

(b) How many more pupils went by car instead of the bus?

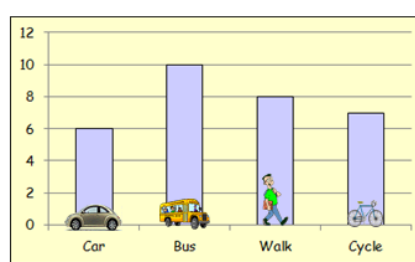
Gold Questions

1



How many people were asked altogether?

2



How many pupils were asked altogether?

Bronze Answers

- | | |
|----------------|---------------|
| 1 (a) 3 people | (b) 10 people |
| 2 (a) 8 pupils | (b) 11 pupils |

Silver Answers

- | | |
|----------------|--------------|
| 1 (a) 2 people | (b) 5 people |
| 2 (a) 4 pupils | (b) 6 pupils |

Gold Answers

- 27 people asked altogether
- 31 pupils asked altogether