

# Outcome 1 - Identifying Lines of Symmetry

## Bronze examples

Examples...

Fill in the line of symmetry...

Shapes...

Letters...

Road signs...

## Silver examples

Examples...

Fill in the two lines of symmetry...

Shapes...

Traffic Signs...

## Gold examples

Examples...

Fill in the lines of symmetry...

Shapes...

Traffic Signs...

## Bronze Questions

Draw the following shapes clearly showing the line of symmetry...

### Shapes



### Letters



### Road Signs



## Silver Questions

Draw the following shapes clearly showing the 2 lines of symmetry...

### Shapes



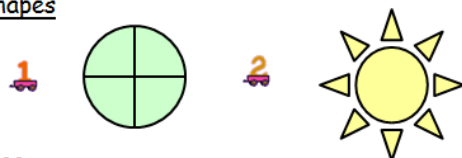
### Traffic Signs



## Gold Questions

Draw the following shapes clearly showing the lines of symmetry...


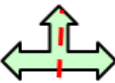




### Shapes




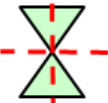


### Traffic Signs



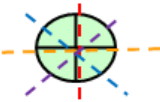


## Bronze Answers

1. 
2. 
3. 
4. 
5. 
6. 

## Silver Answers

1. 
2. 
3. 
4. 

## Gold Answers

1. 
2. 
3. 
4. No lines of symmetry