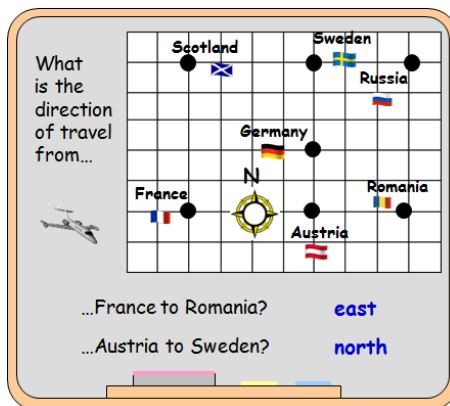
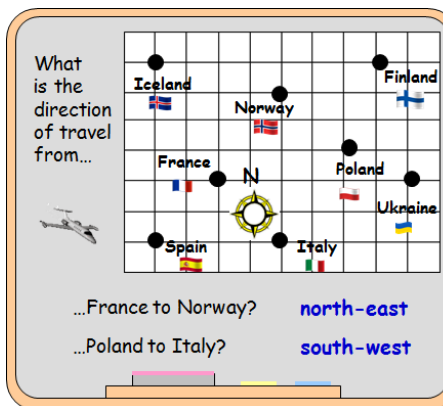


# Outcome 2 - Directions using compass points

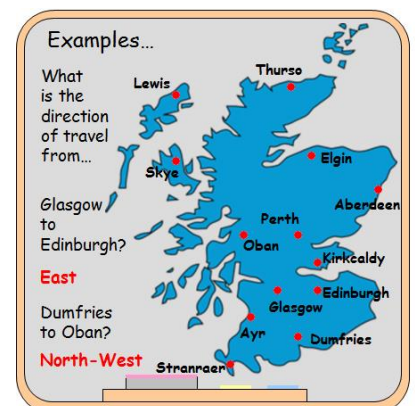
## Bronze examples



## Silver examples



## Gold examples



## Bronze Questions

What is the direction of travel from...

- 1 ...France to Scotland?
- 2 ...Sweden to Russia?
- 3 ...Austria to Germany?
- 4 ...Romania to Austria?
- 5 ...Romania to France?
- 6 ...France to Austria?
- 7 ...Romania to Russia?
- 8 ...Sweden to Austria?

## Silver Questions

What is the direction of travel from...

- 1 ...France to Norway?
- 2 ...Ukraine to Finland?
- 3 ...Finland to Spain?
- 4 ...Norway to Ukraine?
- 5 ...Finland to Poland?
- 6 ...Italy to Poland?
- 7 ...Italy to Ukraine?
- 8 ...Finland to France?

## Gold Questions

Using the map on the gold example board what is the direction of travel from...

- 1 ...Ayr to Perth?
- 2 ...Dumfries to Ayr?
- 3 ...Edinburgh to Glasgow?
- 4 ...Aberdeen to Stranraer?

## Bronze Answers

- |          |          |
|----------|----------|
| 1. north | 2. east  |
| 3. north | 4. west  |
| 5. west  | 6. east  |
| 7. north | 8. south |

## Silver Answers

- |               |               |
|---------------|---------------|
| 1. north-east | 2. north-west |
| 3. south-west | 4. south-east |
| 5. south-west | 6. north-east |
| 7. north-east | 8. south-west |

## Gold Answers

- |               |               |
|---------------|---------------|
| 1. North-East | 2. North-West |
| 3. West       | 4. South-West |