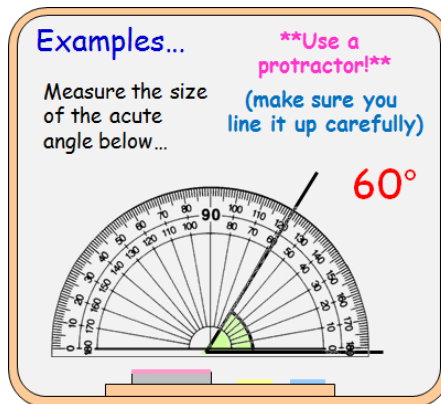
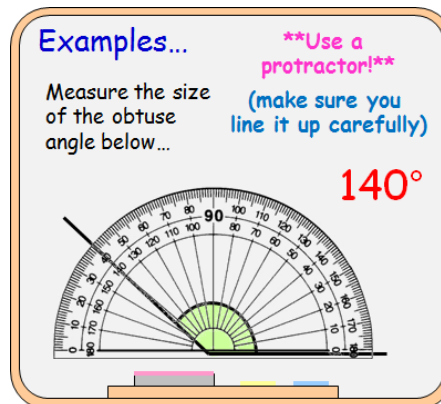


Outcome 1 - Measuring Angles

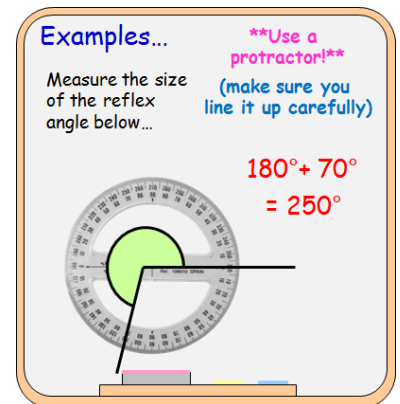
Bronze example



Silver example



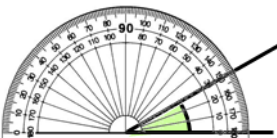
Gold example



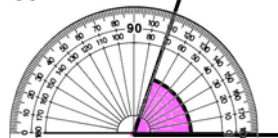
Bronze Questions

Write down the size of the following acute angles...

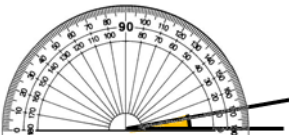
1



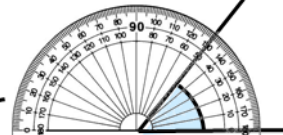
2



3



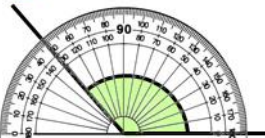
4



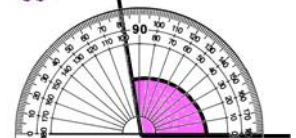
Silver Questions

Write down the size of the following obtuse angles...

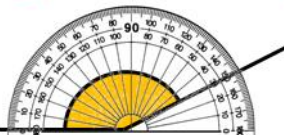
1



2



3



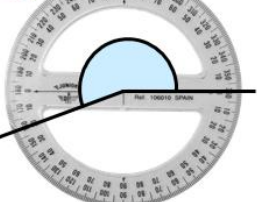
4



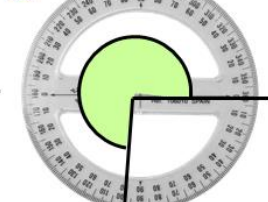
Gold Questions

Write down the size of the following reflex angles...

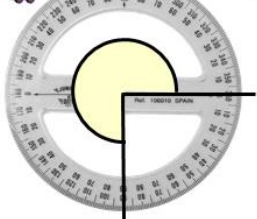
1



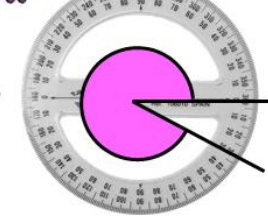
2



3



4



Bronze Answers

- | | |
|---------------|---------------|
| 1. 30° | 2. 70° |
| 3. 10° | 4. 50° |

Silver Answers

- | | |
|----------------|----------------|
| 1. 130° | 2. 100° |
| 3. 150° | 4. 110° |

Gold Answers

- | | |
|----------------|----------------|
| 1. 200° | 2. 260° |
| 3. 270° | 4. 330° |