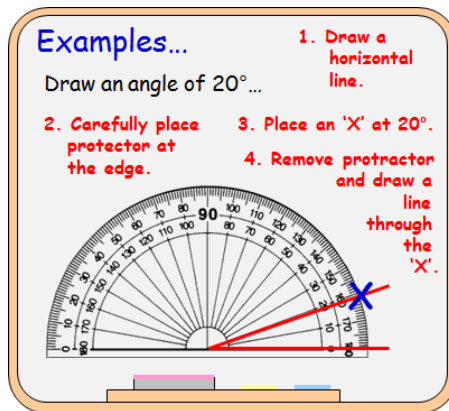
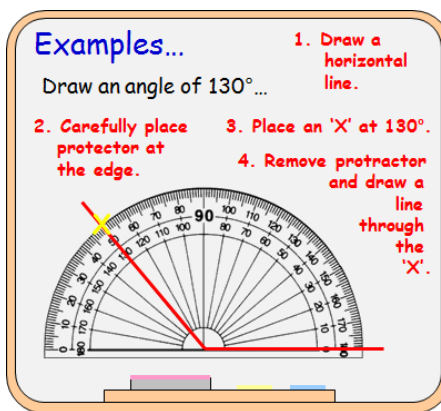


Outcome 2 - Drawing Angles

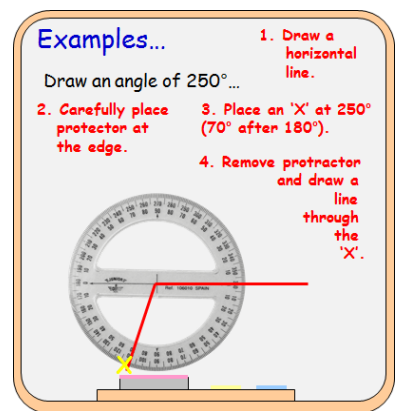
Bronze example



Silver example



Gold example



Bronze Questions

Draw angles for the following measurements below...

- | | | | |
|---|------------|----|------------|
| 1 | 30° | 2 | 80° |
| 3 | 10° | 4 | 65° |
| 5 | 25° | 6 | 45° |
| 7 | 38° | 8 | 78° |
| 9 | 18° | 10 | 86° |

Silver Questions

Draw angles for the following measurements below...

- | | | | |
|---|-------------|----|-------------|
| 1 | 140° | 2 | 170° |
| 3 | 110° | 4 | 125° |
| 5 | 105° | 6 | 145° |
| 7 | 167° | 8 | 128° |
| 9 | 176° | 10 | 111° |

Gold Questions

Draw angles for the following measurements below...

- | | | | |
|---|-------------|----|-------------|
| 1 | 260° | 2 | 230° |
| 3 | 340° | 4 | 320° |
| 5 | 345° | 6 | 225° |
| 7 | 257° | 8 | 185° |
| 9 | 312° | 10 | 236° |

Bronze Answers

**** Get someone to
check your diagrams****

Silver Answers

**** Get someone to
check your diagrams****

Gold Answer

**** Get someone to
check your diagrams****