

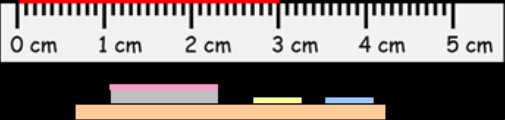
# Outcome 2 - Measuring Length

## Bronze example

**Examples...**

Draw a line measuring 3 cm.

- Place your ruler carefully onto your jotter.
- Starting at 0, work your way along the ruler with your pencil stopping when you get to 3.

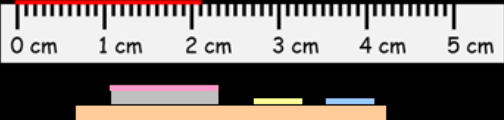


## Silver example

**Examples...**

Draw a line measuring 20 mm.






- Place your ruler carefully onto your jotter.
- Starting at 0, work your way along the ruler with your pencil stopping when you get to 2.



## Bronze Questions

Draw the following lines below...








-  Draw a line measuring 5 cm.
-  Draw a line measuring 9 cm.
-  Draw a line measuring 16 cm.
-  Draw a line measuring 22 cm.
-  Draw a line measuring 26 cm.

## Silver Questions

Draw the following lines below...



-  Draw a line measuring 10 mm.
-  Draw a line measuring 60 mm.
-  Draw a line measuring 120 mm.
-  Draw a line measuring 170 mm.
-  Draw a line measuring 250 mm.

Bronze Answers

**\*\* Get someone to  
check your answers  
with a ruler \*\***



Silver Answers

**\*\* Get someone to  
check your answers  
with a ruler \*\***

1 cm, 6 cm, 12 cm, 17 cm & 25 cm.

