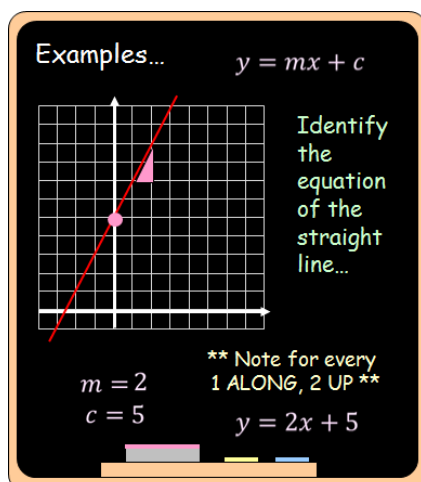
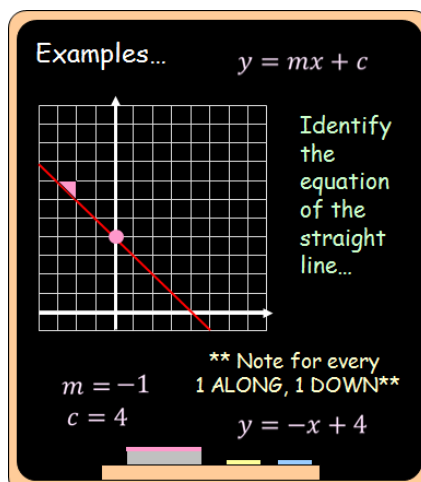


Outcome 2 - Identifying the equation of a straight line

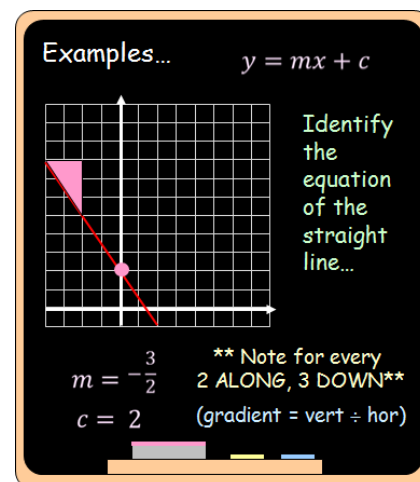
Bronze example



Silver example

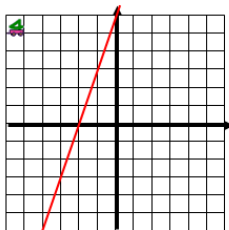
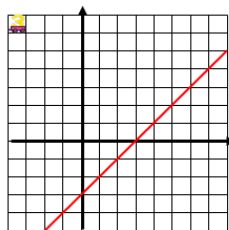
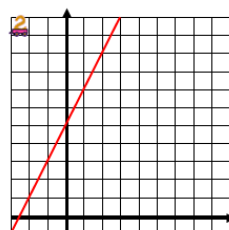
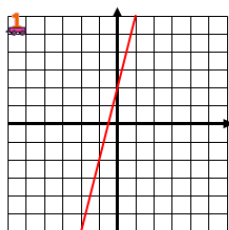


Gold example



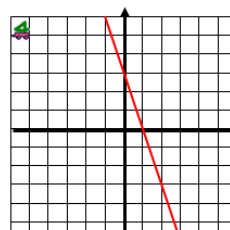
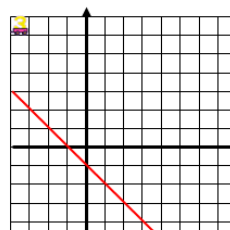
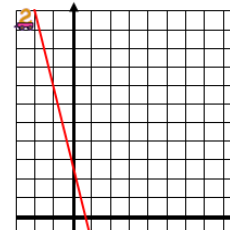
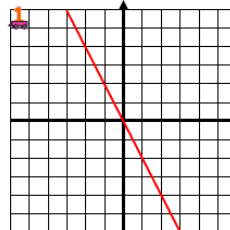
Bronze Questions

Identify the equations of the following straight lines...



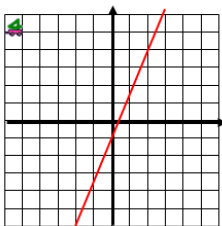
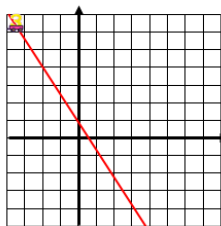
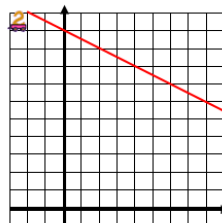
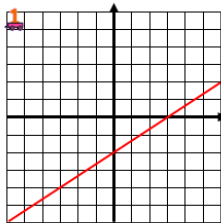
Silver Questions

Identify the equations of the following straight lines...



Gold Questions

Identify the equations of the following straight lines...



Bronze Answers

1. $y = 4x + 2$ 2. $y = 2x + 5$

3. $y = x - 3$ 4. $y = 3x + 6$

Silver Answers

1. $y = -2x$ 2. $y = -4x + 3$

3. $y = -x - 1$ 4. $y = -3x + 3$

Gold Answers

1. $y = \frac{2}{3}x - 2$ 2. $y = -\frac{1}{2}x + 10$

3. $y = -\frac{3}{2}x + 1$ 4. $y = \frac{5}{2}x - 1$