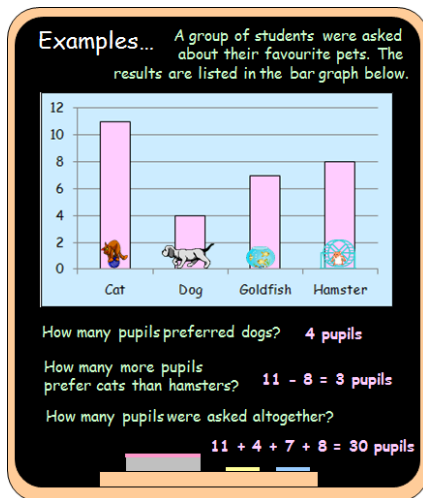
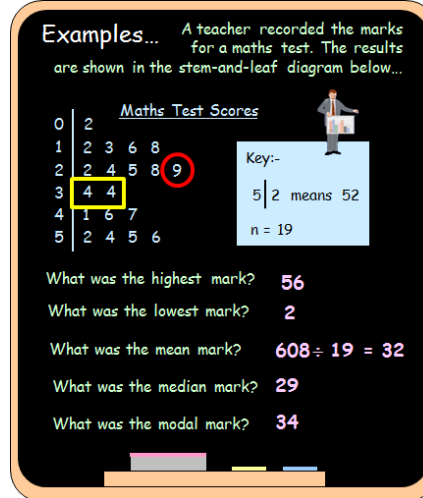


Outcome 1 - Interpreting Bar Graphs, Stem & Leaf Diagrams and Pie Charts

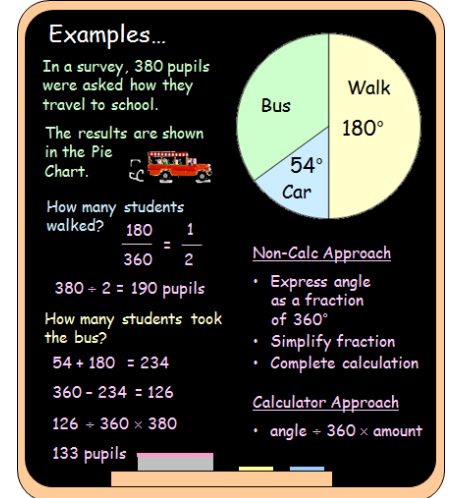
Bronze example



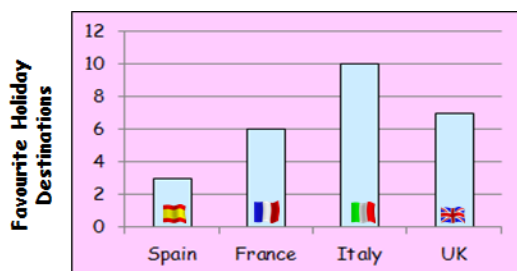
Silver example



Gold example



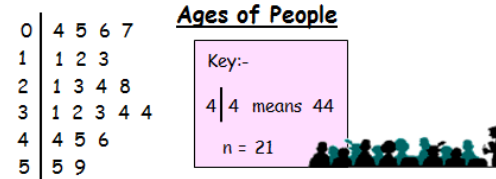
Bronze Questions



- How many people went to Spain?
- How many people went to Italy?
- How many more people went to Italy than Spain?
- How many more people went to UK than France?
- How many people were asked altogether?

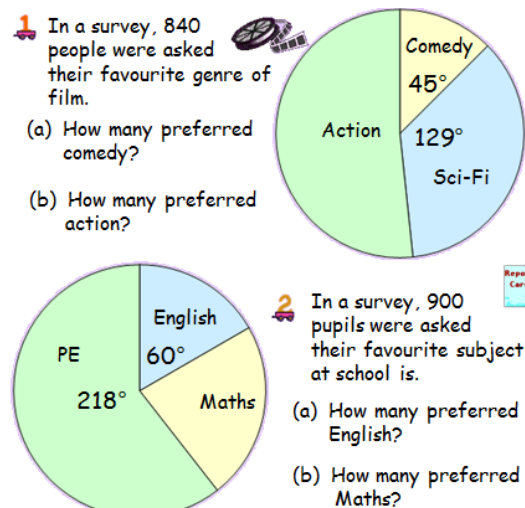
Silver Questions

This stem-and-leaf diagram shows the ages of people at a cinema...



- What was the highest age?
- What was the lowest age?
- What was the mean age?
- What was the median age?
- What was the modal age?

Gold Questions



Bronze Answers

1. 3 people
2. 10 people
3. 7 people
4. 1 person
5. 26 people

Silver Answers

1. 59
2. 4
3. $567 \div 21 = 27$
4. 28
5. 34

Gold Answers

1. 105 people
2. 434 people
3. 150 pupils
4. 205 pupils