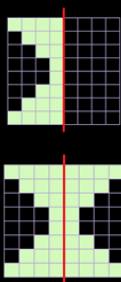


# Outcome 2 - Reflecting Shapes in Lines of Symmetry

## Bronze example

Examples...

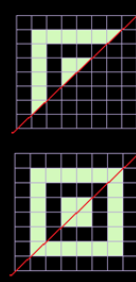
Copy and complete the shape so that the red line is a line of symmetry...



## Silver example

Examples...

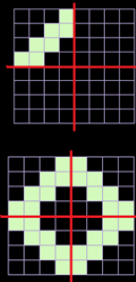
Copy and complete the shape so that the red line is a line of symmetry...



## Gold example

Examples...

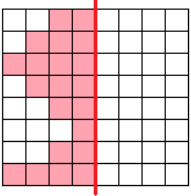
Copy and complete the shape so that two red lines are lines of symmetry...

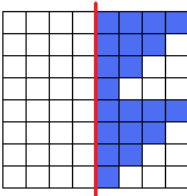


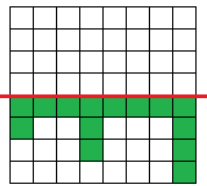
## Bronze Questions

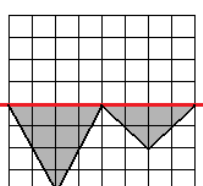
Complete the shape so that the red line is a line of symmetry...



1 

2 

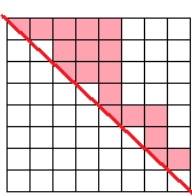
3 

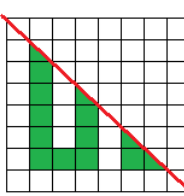
4 

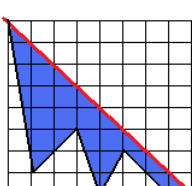
## Silver Questions

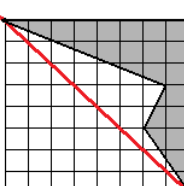
Complete the shape so that the red line is a line of symmetry...



1 

2 

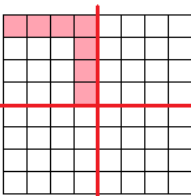
3 

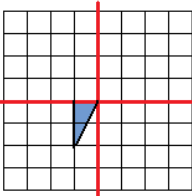
4 

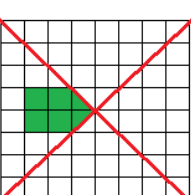
## Gold Questions

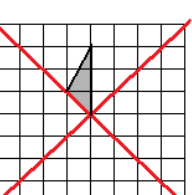
Complete the shape so that the red lines are lines of symmetry...



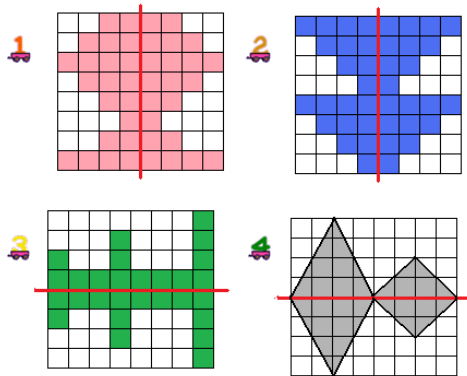
1 

2 

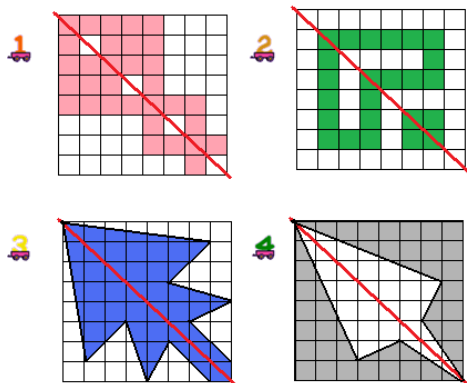
3 

4 

### Bronze Answers



### Silver Answers



### Gold Answers

