









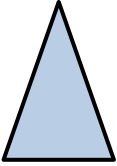


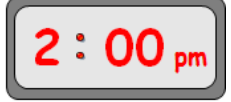








<p>1 Write these numbers in order from the smallest to the biggest; 31, 24, 52, 43</p>	<p>2</p> $\begin{array}{r} 43 \\ + 28 \\ \hline \end{array}$	<p>3 This pizza is to be shared equally amongst three people. How many slices will they each get?</p> 	<p>4 If today is Tuesday, what day was it the day before yesterday?</p> 	<p>5 What shape is this firework?</p> 	<p>6 Calculate 32×10</p>
<p>7 Write the number 4090 in words</p> 	<p>8 How many 50p's are there in £10?</p> 	<p>9 Round 176 to the nearest 10</p>	<p>10</p> $\begin{array}{r} 65 \\ - 27 \\ \hline \end{array}$	<p>11 What number is 40 more than 630?</p> 	<p>12 Write the time shown here in words</p> 
<p>13 Calculate $500 \div 10$</p>	<p>14 Estimate which of these animals is the heaviest.</p> 	<p>15 There were 24 people on a bus. At the next stop, 9 got off and 12 got on. How many people were now on the bus?</p> 	<p>16 In the number 5369 what does the 3 stand for?</p>	<p>17 What fraction of this shape is shaded?</p> 	<p>18 What is the name of this 2D shape?</p> 
<p>19 How many days are there in September?</p> 	<p>20</p> $\begin{array}{r} 54 \\ \times 3 \\ \hline \end{array}$	<p>21 Draw the next two terms in this sequence.</p> 	<p>22 Write the following in 24 hour time...</p> 	<p>23 If my lunch cost £2.30 and I paid with a £5 note, how much change would I receive?</p> 	<p>24 Is this statement true or false? $3 < 4$</p>
<p>25 It costs 82p for a can from a vending machine. How much would 4 cans cost?</p> 	<p>26 What is the value of the missing number represented by the shape below? $8 + \square = 11$</p>	<p>27</p> $\begin{array}{r} 2 \overline{) 78} \end{array}$	<p>28 On this map, what direction should the pirate travel in to get to the treasure?</p> 	<p>29 Write the 29th of November 1984 as numbers only.</p>	<p>30 Which is bigger? 5×4 or 3×7 Give a reason for your answer!</p> 

RIGOUR

by cdmasterworks Ltd

Numeracy for Learning, Life and Work



November CfE 1st Level Calendar

#abitofmathseveryday



1	2	3	4	5	6
7	8	9	10	11	12
13	14	15	16	17	18
19	20	21	22	23	24
25	26	27	28	29	30