










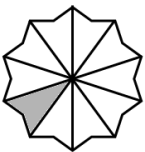














$$\begin{array}{r} 1 \quad 325 \\ + 654 \\ \hline \end{array}$$

<p><b>2</b> Today is National ice-cream day.</p> <p>How much change would I receive from £5 if I bought three 99p cones?</p> 	<p><b>3</b> What number is 400 more than 800?</p> 	<p><b>4</b> Today is National chocolate chip cookie day.</p> <p>What 2D shape is this chocolate chip cookie?</p> 	<p><b>5</b> How many 10p's are there in £3.40?</p> 	<p><b>6</b> Write the number 6080 in words</p> 	<p><b>7</b> In the number 50 678 what does the 6 stand for?</p> 
<p><b>8</b> Write these numbers in order from the smallest to the biggest:</p> <p>30, 330, 3, 303</p>	<p><b>9</b> Today is National book lovers day.</p> <p>If I read a book a week, how many books would I read in a year?</p> 	<p><b>10</b> <math display="block">\begin{array}{r} 9876 \\ - 5203 \\ \hline \end{array}</math></p>	<p><b>11</b> Calculate <math>150 \div 10</math></p>	<p><b>12</b> How many days are there in November?</p> 	<p><b>13</b> Today is National international left handers day.</p> <p>How many fingers in total are on 5 left hands?</p> 
<p><b>14</b> Write the following in 24 hour time...</p> <p>5:14 am</p> 	<p><b>15</b> Today is National relaxation day.</p> <p>If Cari goes to bed at 8 pm and has a long lie until 10 am, how many hours does she sleep?</p> 	<p><b>16</b> What fraction of this shape is shaded?</p> 	<p><b>17</b> Write the next two numbers this sequence.</p> <p>20, 17, 14, 11, ...</p>	<p><b>18</b> What symbol should go in place of the star to make this calculation correct?</p> <p>8  12 = 20</p>	<p><b>19</b> Write the 19<sup>th</sup> of August 2001 as numbers only.</p> 
<p><b>20</b> <math display="block">\begin{array}{r} 53 \\ \times 3 \\ \hline \end{array}</math></p>	<p><b>21</b> Write the time shown here in words</p> 	<p><b>22</b> Today is National tooth fairy day.</p> <p>A toddler has 20 milk teeth by the time they are 3 years old. An adult has 12 teeth more than this. How teeth does an adult have?</p> 	<p><b>23</b> Today is National sponge cake day.</p> <p>A sponge cake is halved, and then halved again. How many slices has the sponge cake been cut into?</p> 	<p><b>24</b> If today is Friday, what day was it 1 week ago?</p> 	<p><b>25</b> <math display="block">\begin{array}{r} 2 \overline{) 628} \end{array}</math></p>
<p><b>26</b> Today is National dog day.</p> <p>How many legs in total are there if there are 12 dogs?</p> 	<p><b>27</b> What is the value of the missing number represented by the shape below?</p> <p>4 +  = 7</p>	<p><b>28</b> ? Which is bigger?</p> <p>42 + 23 or 8 x 8</p> <p>Give a reason for your answer!</p>	<p><b>29</b> Today is National lemon juice day.</p> <p>How many 200 ml glasses can be poured from 1 litre of lemon juice?</p> 	<p><b>30</b> Today is National beach day.</p> <p>The longest beach in Scotland, Balmedie Beach, is 14 miles. The longest beach in England, Chesil beach, is 4 miles longer. How long is Chesil beach?</p> 	<p><b>31</b> Is this statement true or false?</p> <p>0.2 &lt; 0.09</p>

# RIGOUR

by cdmasterworks Ltd

Numeracy for Learning, Life and Work



## August CfE 1<sup>st</sup> Level Calendar

### #abitofmathseveryday



1

2	3	4	5	6	7
8	9	10	11	12	13
14	15	16	17	18	19
20	21	22	23	24	25
26	27	28	29	30	31