











## MTH 4-20b

## Homework 3

## Bronze Level











## Outcome 1 - Calculating the Range

Calculate the range from the following lists...

- |   |  |
|---|--|
|  36, 52, 69, 86, 25     |  94, 42, 28, 53     |
|  26, 28, 22, 23, 25, 27 |  42, 58, 45, 52, 48 |
|  15, 12, 13, 12, 14, 15 |  64, 57, 72, 49, 28 |
|  73, 65, 69, 74, 67, 75 |  81, 85, 83, 82, 80 |
|  48, 52, 84, 99, 65     |  150, 130, 110, 140 |











## Outcome 3 - Calculating the Median

Calculate the median from the following lists...

- |   |  |
|---|--|
|  59, 68, 46, 83, 75           |  15, 36, 27           |
|  63, 82, 28, 44, 39          |  69, 68, 61, 65, 63  |
|  50, 58, 64, 52, 53, 60, 56 |  75, 82, 76, 79, 81 |
|  21, 12, 20, 17, 7, 14, 15  |  51, 71, 41, 31, 91 |
|  32, 34, 26, 24, 36, 20, 30 |  48, 40, 42, 47, 46 |











## Outcome 2 - Calculating the Mean

Calculate the mean from the following lists...

- |  |  |
|--|--|
|  44, 58, 91, 34, 63     |  24, 57, 36     |
|  20, 42, 15, 34, 49     |  41, 78, 22, 59 |
|  32, 56, 25, 83, 64     |  26, 39, 55, 48 |
|  51, 77, 92, 46, 35, 83 |  28, 31, 27, 34 |
|  19, 31, 25, 21, 35, 19 |  57, 83, 76     |

## Outcome 4 - Calculating the Mode

Calculate the mode for the following lists...

- |   |  |
|---|--|
|  73, 74, 72, 73, 76           |  84, 75, 66, 64, 75   |
|  43, 42, 48, 42, 46, 49      |  63, 60, 62, 63, 64  |
|  35, 55, 15, 75, 45, 55, 25 |  26, 23, 29, 22, 29 |
|  93, 98, 97, 79, 69, 93, 93 |  44, 14, 42, 24, 14 |
|  43, 77, 98, 46, 56, 43, 38 |  33, 22, 33, 22, 22 |