



MTH 4-17b

Assessment 3

Gold Level



Name: _____

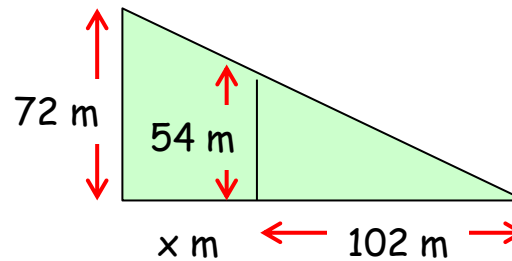
Score: 3

Percentage: %

Class: _____

Outcome 1 - Similar Triangles

The following shapes are mathematically similar. Calculate the length of the missing side...

**Outcome 2 - Similar Areas**

The following objects are mathematically similar. Calculate the missing side...




? cm

Area = 224 cm^2 


84 cm

Area = 8064 cm^2 **Outcome 3 - Similar Volumes**

The following objects are mathematically similar. Calculate the missing side...

Volume
24 litres

6 m

Volume
192 litres

? m