

Name: \_\_\_\_\_

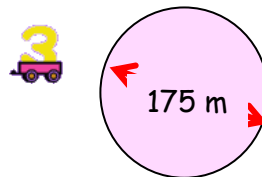
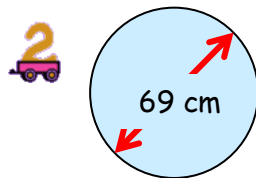
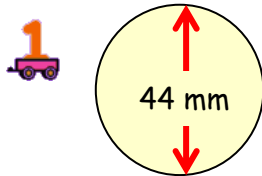
Score: 5

Percentage: %

Class: \_\_\_\_\_

**Outcome 1 - Circumference of a Circle**

Calculate the circumferences of the following circles...

**Outcome 2 - Area of a Circle**

Calculate the areas of the following circles...

