

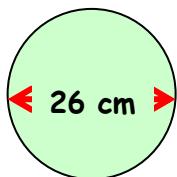
Outcome 1

Circumference of a Circle

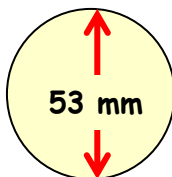
Calculate the circumferences of the following circles...



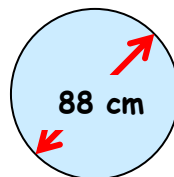
1



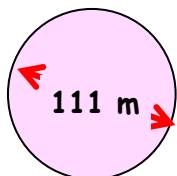
2



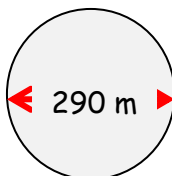
3



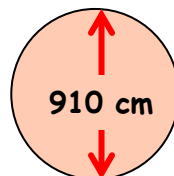
4



5



6



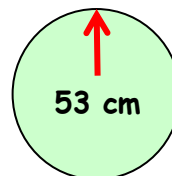
Outcome 2

Area of a Circle

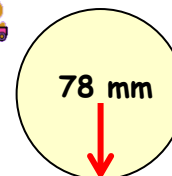
Calculate the areas of the following circles...



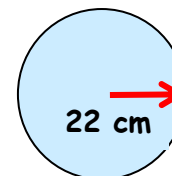
1



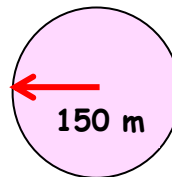
2



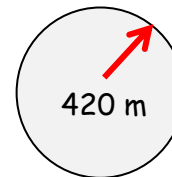
3



4



5



6

