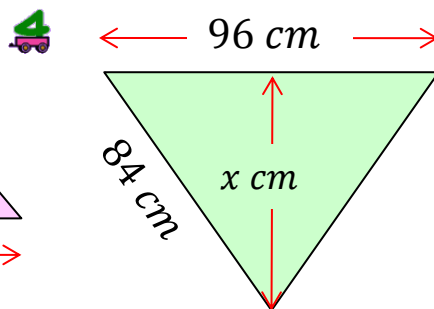
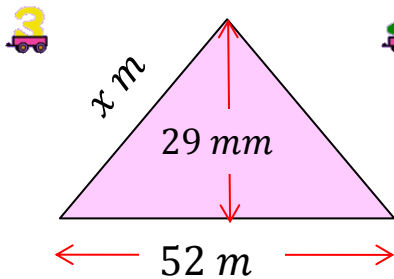
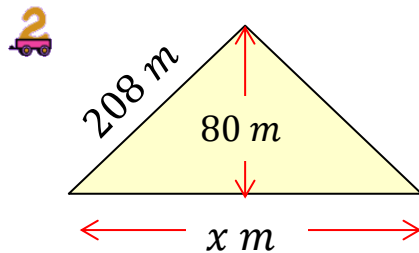
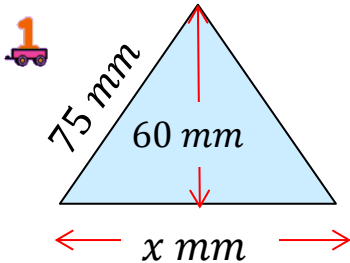


Outcome 1 - Pythagoras' Theorem



Calculate the length of the side marked 'x' in the triangles below...



Outcome 2 - Right-Angled Trigonometry

Calculate the length of the side marked 'x' in the triangles below...

