

MTH 4-16a

Assessment 3

Silver Level



Name: _____

Score: _____

Percentage: %

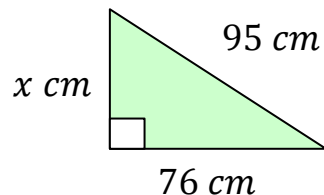
Class: _____

5

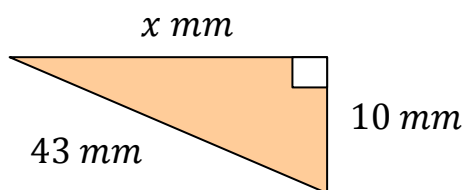
Outcome 1 - Pythagoras' Theorem

Calculate the length of the side marked 'x' in the triangles below...

1

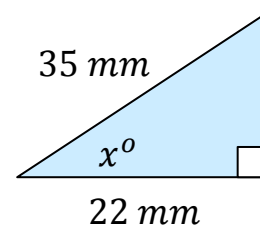


2

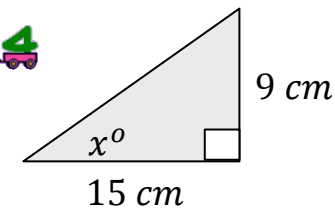
**Outcome 2 - Right-Angled Trigonometry**

Calculate the size of the angle marked 'x' in the triangles below...

3



4



5

