

Name: _____

Score: 5

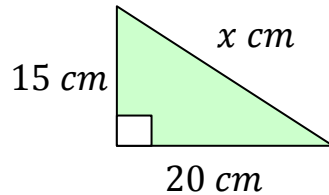
Percentage: %

Class: _____

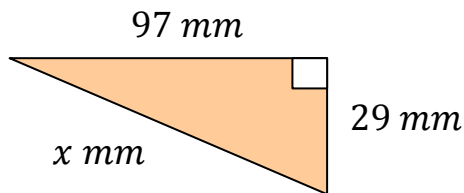
Outcome 1 - Pythagoras' Theorem

Calculate the length of the side marked 'x' in the triangles below...

1

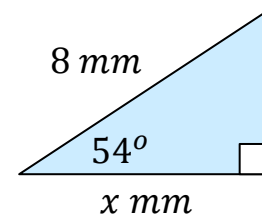


2

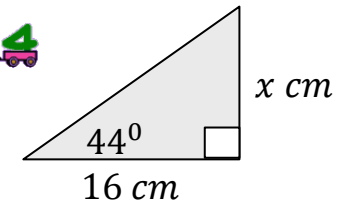
**Outcome 2 - Right-Angled Trigonometry**

Calculate the length of the side marked 'x' in the triangles below...

3



4



5

