





**Outcome 1 - Gradient between 2 points**


Calculate the gradient of the straight lines passing through the points...


 $(3, 5) \text{ and } (7, 21)$


 $(2, 9) \text{ and } (5, 30)$


 $(7, 2) \text{ and } (9, 14)$


 $(-1, -2) \text{ and } (5, 16)$


 $(-2, -4) \text{ and } (4, 8)$

 $(5, 12) \text{ and } (9, -4)$

 $(-2, 7) \text{ and } (5, -14)$

 $(3, -5) \text{ and } (8, -30)$

 $(-3, 6) \text{ and } (6, 60)$

 $(-3, 4) \text{ and } (2, -6)$