


Outcome 1

For the following tables...


Linear Patterns

- Write down a rule
- Complete the table


1

weeks (W) 	1	2	3	19	?
amount saved (£)	7	11	15	?	95


2

pattern (P) 	1	2	3	22	?
sticks (S)	5	11	17	?	209

3

tables (T) 	1	2	3	30	?
chairs (C)	3	5	7	?	95

4

squares (S) 	1	2	3	41	?
rectangles (R)	4	7	10	?	163