

Name: _____

Score: 4


Percentage: %

Class: _____

Outcome 1 - Linear Patterns

For the following tables, write down
a rule and complete the table.


1

pentagons (P) 	1	2	3	12	
matchsticks (M)	5	9	13		117


2

octogons (O)	1	2	3	23	
no. of bolts (B)	8	15	22		225

3

days (D) 	1	2	3	29	
hire cost (C)	15	20	25		235

4

weeks (W) 	1	2	3	36	
amount saved (£)	9	12	15		156