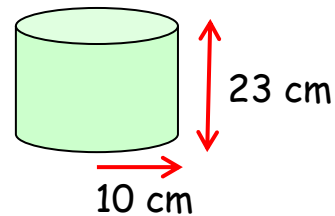


Name: _____

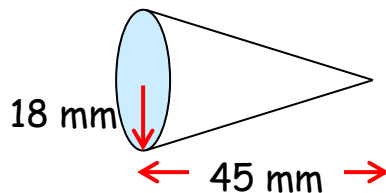
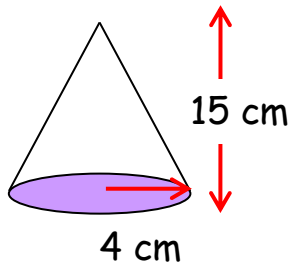
Score: 5

Percentage: %

Class: _____

Outcome 1 - Volume of a CylinderFind the volume of
the following cylinder...**Outcome 2 - Volume of a Cone**

Find the volumes of the following cones...

**Outcome 3 - Volume of a Sphere**

Find the volumes of the following spheres...

