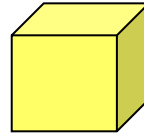


Outcome 1 - Surface Area of a Cube

1

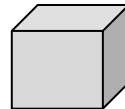
Calculate the surface area of a cube with sides 10 centimetres.



10 cm

2

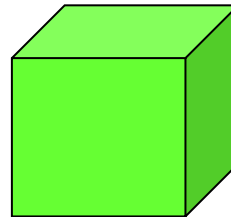
Calculate the surface area of a cube with sides 7.5 millimetres.



7.5 mm

3

Calculate the surface area of a cube with sides 40 metres.



40 m