



Name: _____

Score: 5

Percentage: %

Class: _____

Outcome 1 - Tally Frequency Tables

Draw a tally frequency table for the following data set...

1 Number of students in a lecture...

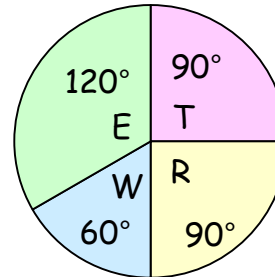


44	38	56	61	39	48	54	62
73	58	42	37	51	68	52	70

Outcome 2 - Interpreting Pie Charts

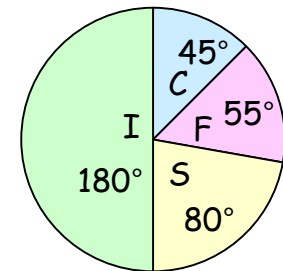
For each pie chart, calculate the following...

2 48 athletes asked. How many preferred weights?



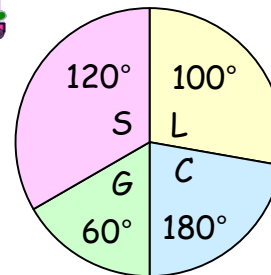
- Treadmill
- Rowing
- Weights
- Exercise Bike

3 240 customers asked. How many preferred cola?



- Cola
- Fanta
- Sprite
- Irrn-Bru

4



- Labour
- Conservatives
- Green Party
- S.N.P.

540 voters asked. How many voted S.N.P.?

