

Outcome 1

Tally Frequency Tables

Draw tally frequency tables for the following data sets...

1

Number of children visiting a play park...



51	73	82	62	78
93	56	73	80	71

2

Number of boys attending after school football.....

43	22	38	19	27	34
26	35	26	43	38	25

3

Number of customers at a supermarket...

87	103	94	85	114	67	71
78	83	98	101	93	90	84



4



Number of people passing through a drive-thru...

17	28	16	34	19	26	43	37
36	34	41	57	28	31	44	26

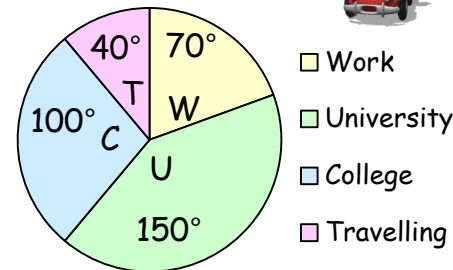
Outcome 2

Interpreting Pie Charts

For each pie chart, calculate the following...

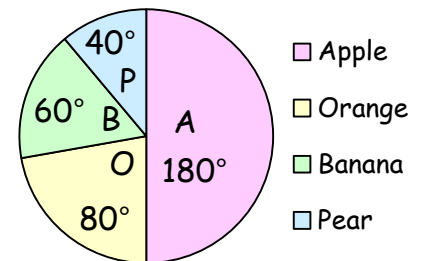
1

72 school leavers asked. How many choose travelling?



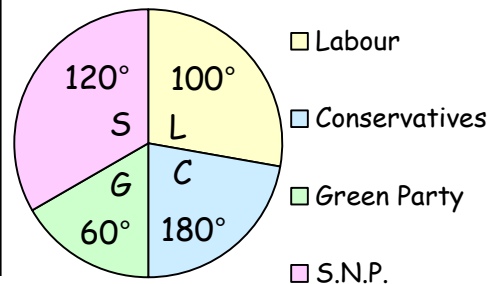
2

12 people asked. How many preferred banana?



3

210 voters asked. How many voted S.N.P.?



4

480 customers asked. How many preferred cola?

