

## MTH 2-21a

## Homework 5

## Bronze Level

### Outcome 1

### Tally Frequency Tables

Draw tally frequency tables for the following data sets...

1

Ages of children at a nursery...



4	4	4	2	2
4	3	3	1	4

2

Number of goals scored by a group of strikers.....



17	17	16	15	18	17
18	17	19	18	17	14

3

Ages of the members of a golf club...


42	44	42	43	45	46	40
43	44	41	42	44	45	46



4

Number of weekly hours on Rigour Maths...

9	10	7	10	8	11	10	10
7	6	10	8	11	7	10	9



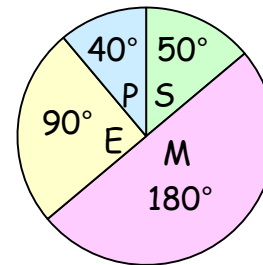
### Outcome 2

### Interpreting Pie Charts

For each pie chart, calculate the following...

1

280 pupils asked.  
How many preferred Maths?

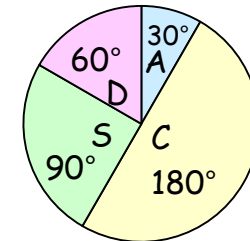


☐ Science  
☐ Maths  
☐ English  
☐ P.E.



2

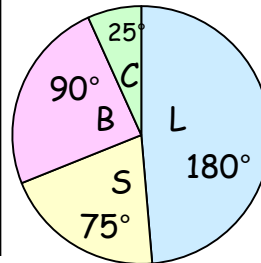
42 adults asked.  
How many preferred comedy?



☐ Action  
☐ Comedy  
☐ Sci Fic  
☐ Drama

3

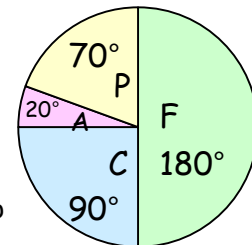
700 fans asked.  
How many preferred Barclays P.L.?



☐ La Liga  
☐ S.P.L.  
☐ Barclays P.L.  
☐ Championship

4

156 drivers asked.  
How many preferred Clio?



☐ Fiesta  
☐ Clio  
☐ Aygo  
☐ Picanto