



MTH 2-19a

Homework 2

Gold Level




## Outcome 1

### Two Lines of Symmetry

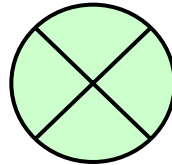
For each shape below, fill in the lines of symmetry...

#### Shapes

1



2



#### Road Signs

3



4

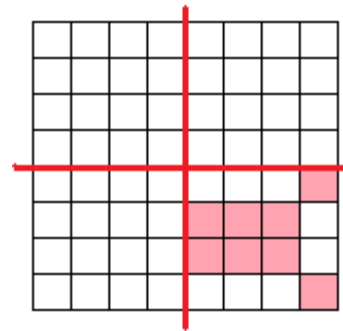


## Outcome 2

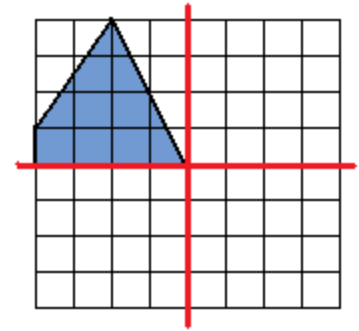
### Reflection in One Line of Symmetry

Complete the shape so that the red lines are lines of symmetry...

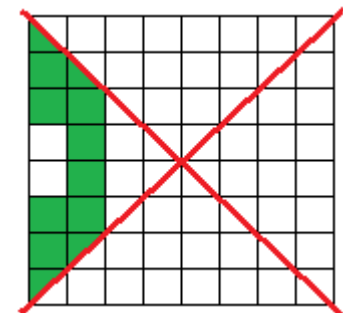
1



2



3



4

