



MTH 2-19a

Assessment 2

Silver Level



Name: \_\_\_\_\_

Score: 5

Percentage: %


Class: \_\_\_\_\_

## Outcome 1 - Two Lines of Symmetry


For each shape below, fill in the 2 lines of symmetry...

### Shapes

1



2



### Road Signs

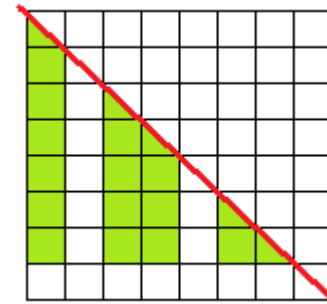
3



## Outcome 2 - Reflection in One Line of Symmetry

Complete the shape so that the red line is a line of symmetry...

4



5

