

MTH 2-19a

Assessment 2

Bronze Level

Name: _____

Score: 10

Percentage: %


Class: _____

Outcome 1 - One Line of Symmetry


For each shape below, fill in the line of symmetry...

Shapes

1



2



Letters

3



4



Road Signs

5



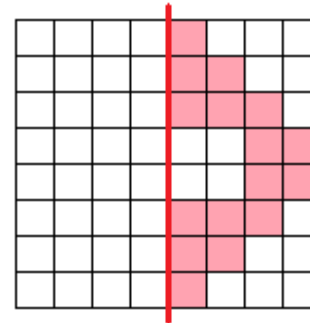
6



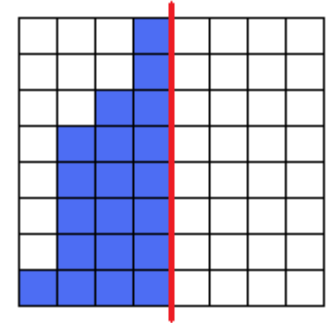
Outcome 2 - Reflection in One Line of Symmetry

Complete the shape so that the red line is a line of symmetry...

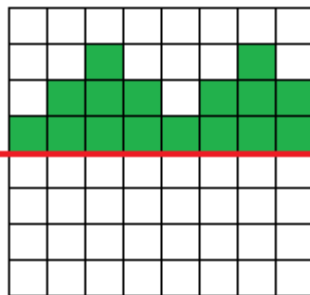
7



8



9



10

