

MTH 2-19a

Homework 2

Bronze Level


## Outcome 1

### One Line of Symmetry


For each shape below, fill in the line of symmetry...

#### Shapes

1



2



#### Letters

3

U

4

C

#### Road Signs

5



6

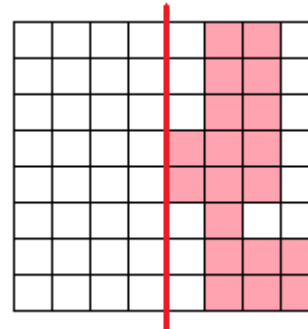


## Outcome 2

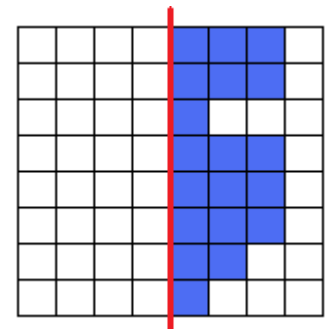
### Reflection in One Line of Symmetry

Complete the shape so that the red line is a line of symmetry...

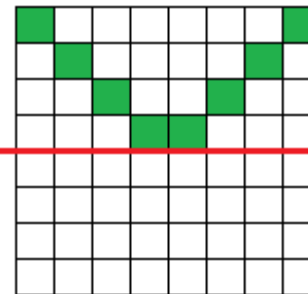
1



2



3



4

