



MTH 2-17b

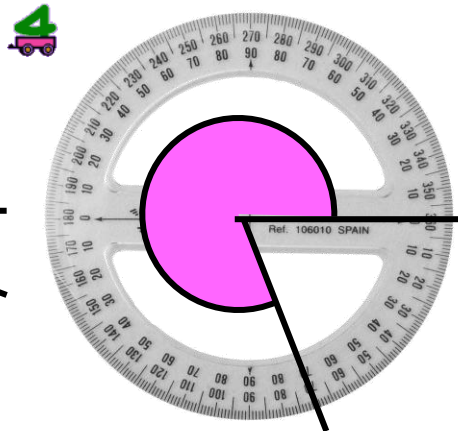
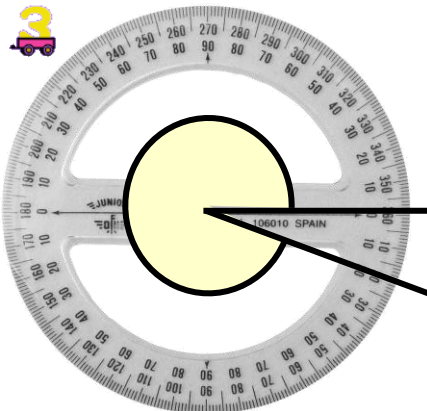
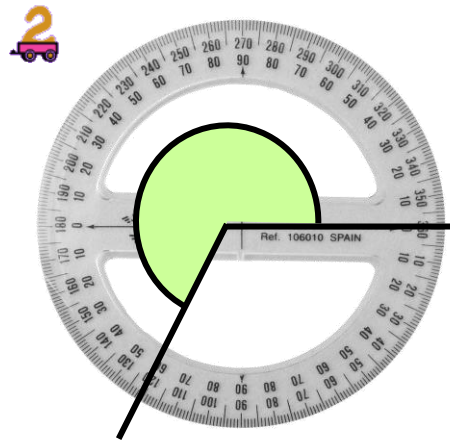
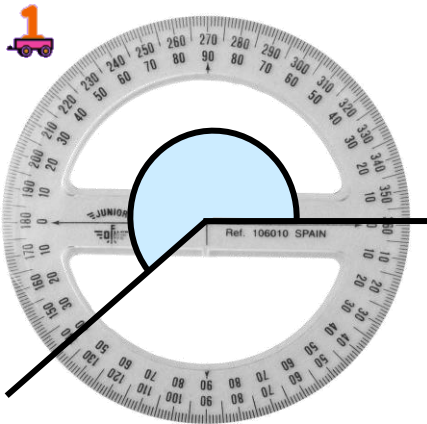
Homework 2

Gold Level



## Outcome 1 - Measuring Angles

Write down the size of the following angles...



## Outcome 2 - Drawing Angles

Draw angles for the following measurements below (on back of sheet)...

1

280°

2

230°

3

350°

4

205°

5

275°

6

225°

7

309°

8

203°

9

357°

10

193°