

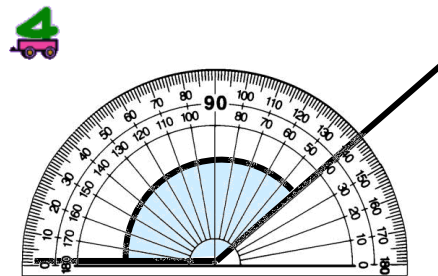
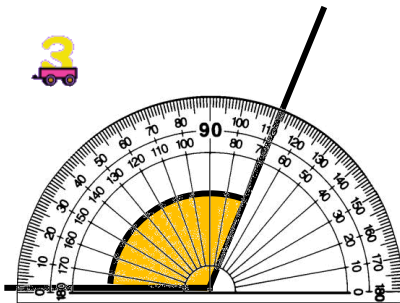
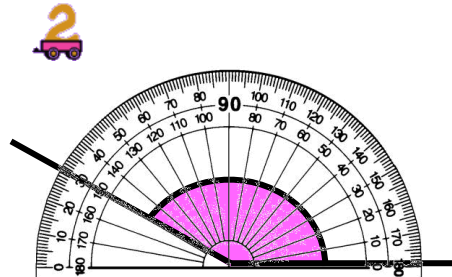
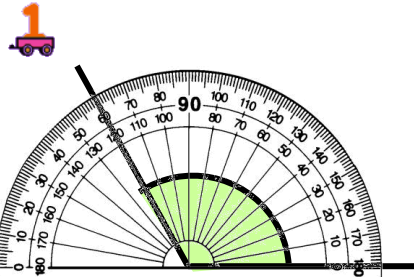
MTH 2-17b

Homework 2

Silver Level

Outcome 1 - Measuring Angles

Write down the size of the following angles...



Outcome 2 - Drawing Angles

Draw angles for the following measurements below (on back of sheet)...

1 160°

2 140°

3 85°

4 135°

5 143°

6 174°

7 132°

8 97°

9 116°

10 128°