

MTH 2-17b

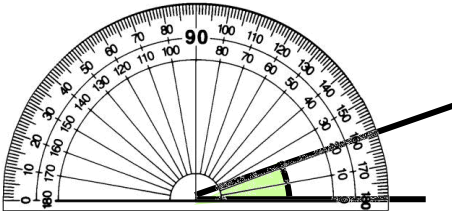
Homework 2

Bronze Level

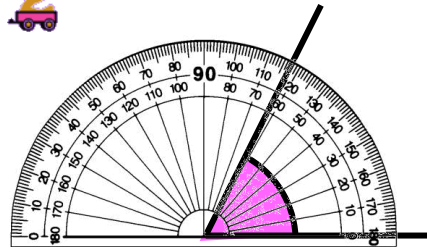
## Outcome 1 - Measuring Angles

Write down the size of the following angles...


1



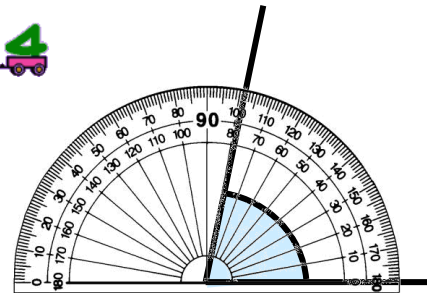
2



3



4



## Outcome 2 - Drawing Angles

Draw angles for the following measurements below (on back of sheet)...

1

40°

2

70°

3

20°

4

35°

5

16°

6

64°

7

89°

8

12°

9

48°

10

73°