

MTH 2-17a

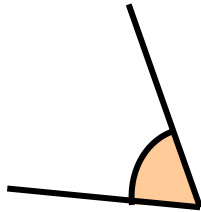
Homework 2

Silver Level

Outcome 1 - Describing Angles

For each angle, state it's type and it's range...


1



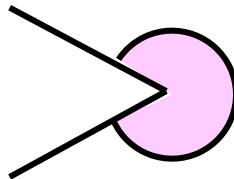
2




3



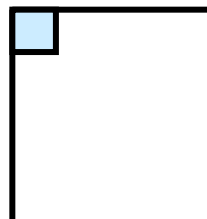
4



5



6



Outcome 2 - Classifying Angles

For each of the following angles, put them into the correct column in the table below.

1

140°

2

35°

3

124°

4

193°

5

90°

6

346°

7

222°

8

180°

9

327°

10

64°

acute	right	obtuse	straight	reflex