

MTH 2-17a

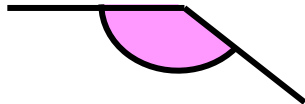
Homework 2

Bronze Level

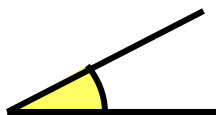
Outcome 1 - Describing Angles

For each angle, state it's type and it's range...

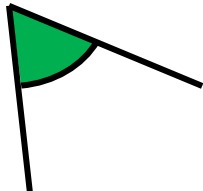
1



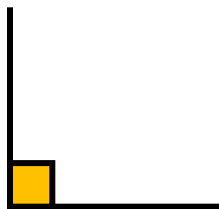
2




3



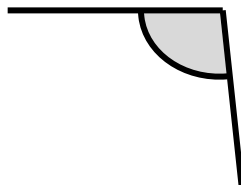
4



5



6



Outcome 2 - Classifying Angles

For each of the following angles, put them into the correct column in the table below.

1

62°

2

112°

3

148°

4

25°

5

81°

6

99°

7

19°

8

178°

9

90°

10

20°

acute	right	obtuse