

MTH 2-16b-c

Homework 2

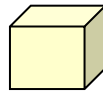
Bronze Level



Outcome 1 - Net of a Cube

1

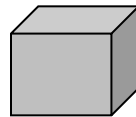
Draw neatly,
a full size net
for a cube
with sides
2 centimetres.



2 cm

2

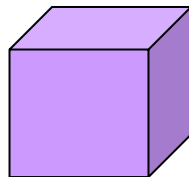
Draw neatly,
a full size net
for a cube
with sides
9 centimetres.



9 cm

3

Draw neatly,
a full size net
for a cube
with sides
14 centimetres.

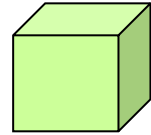


14 cm

Outcome 2 - Surface Area of a Cube

1

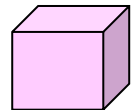
Calculate the surface
area of a cube with
sides 12 centimetres.



12 cm

2

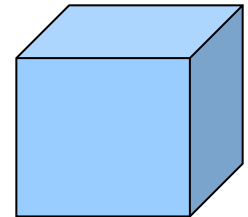
Calculate the surface
area of a cube with
sides 7.5 millimetres.



7.5 mm

3

Calculate the surface
area of a cube with
sides 20 metres.



20 m