

MTH 2-16b-c

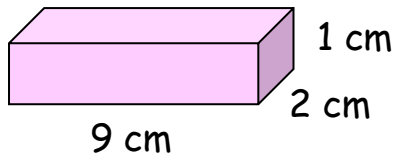
Homework 2

Silver Level

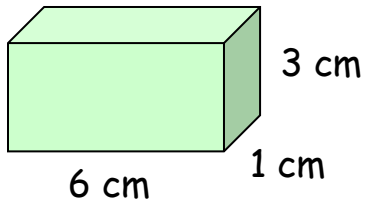
Outcome 1 - Net of a Cuboid

Draw nets for the following cuboids...

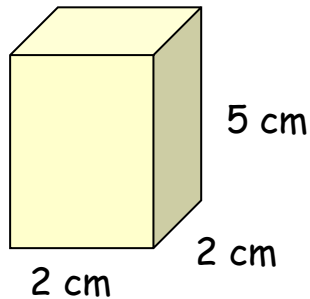
1



2



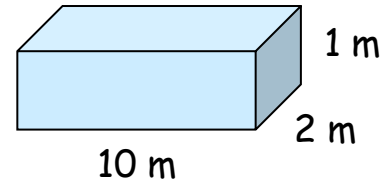
3



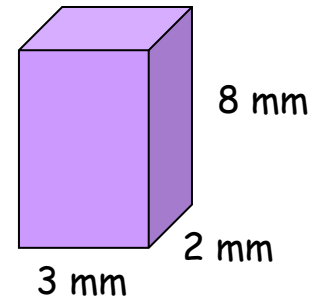
Outcome 2 - Surface Area of a Cuboid

Calculate the surface areas of the following cuboids...

1



2



3

