



MTH 2-16a

Homework 2

Gold Level



For this exercise you will need...

1

A ruler



2

A pencil



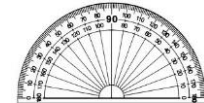
3

A set of compasses



4

A protractor

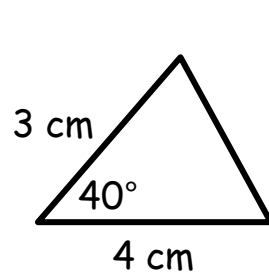


## Outcome 1

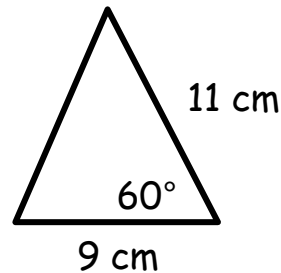
## Drawing Triangles

Make accurate drawings of the following triangles...

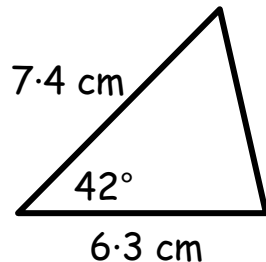
1



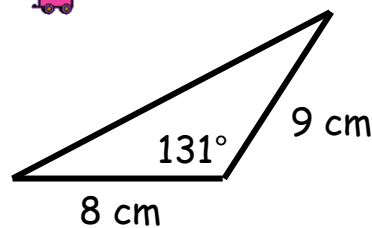
2



3



4

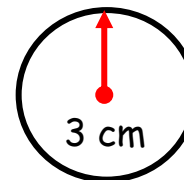


## Outcome 2

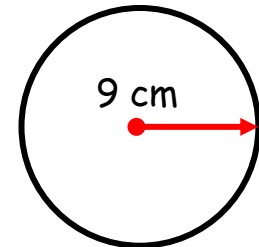
## Drawing Circles

Make accurate drawings of the following circles...

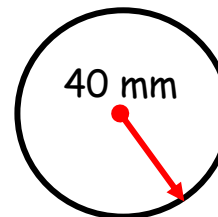
1



2



3



4

