



MTH 2-16a

Assessment 2

Silver Level



Name: \_\_\_\_\_

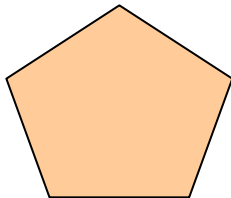
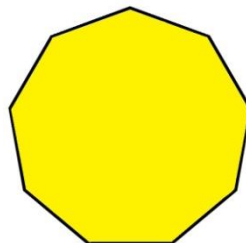
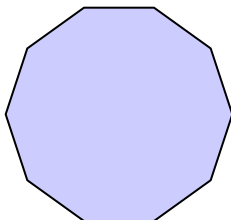
Score:  $\frac{\quad}{5}$ 

Percentage: %


Class: \_\_\_\_\_

**Outcome 1 - 2D Shapes**

For each of the 2D shapes below state their name, the number of sides and the number of vertices...

1  
2  
3  
**Outcome 2 - 3D Objects**

For each of the 3D objects below state their name, the number of faces, the number of sides and the number of vertices...

4  
5  
