

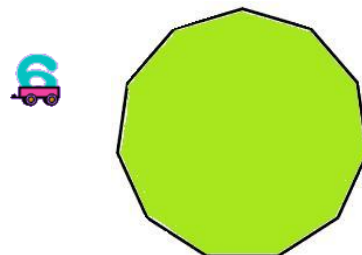
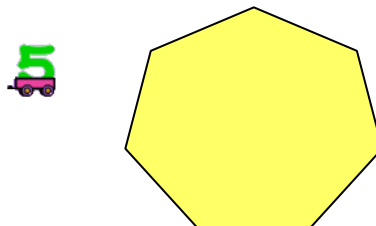
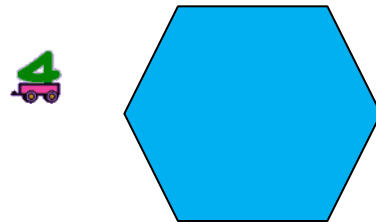
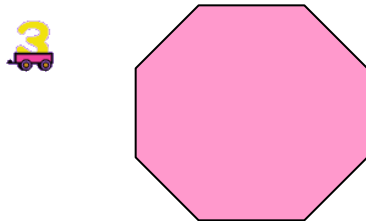

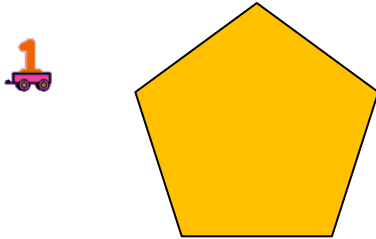
MTH 2-16a

Homework 2

Silver Level

Outcome 1 - 2D Shapes

Sketch each of the 2D shapes below and state their name, the number of sides and the number of vertices...



Outcome 2 - 3D Shapes

Sketch each of the 3D objects below, state their name, the number of faces, the number of sides and the number of vertices...

