

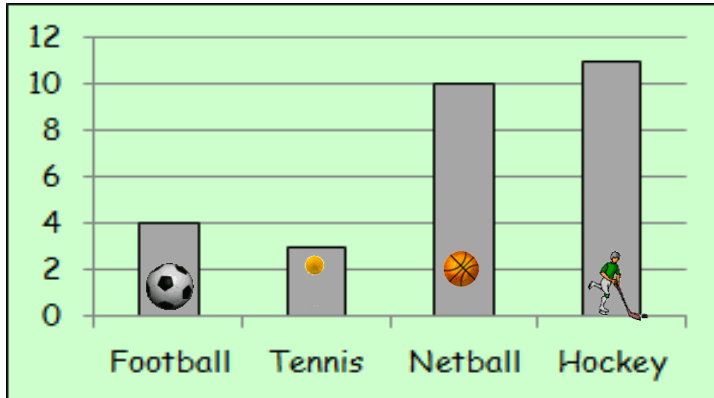
MNU 2-20a

Homework 5

Bronze Level

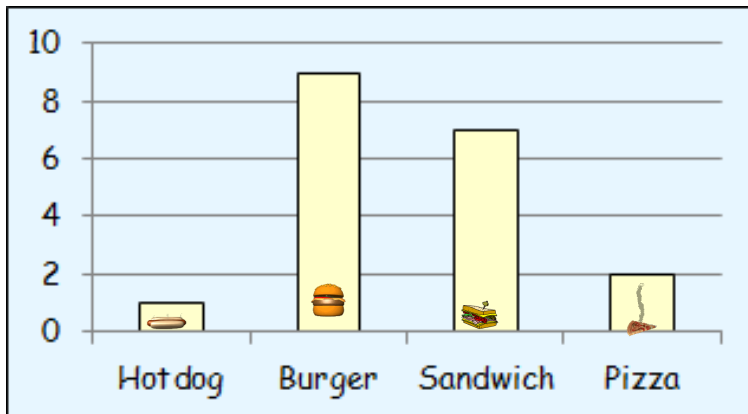
Outcome 1 - Bar Graphs

1



- (a) How many children prefer hockey?
 (b) How many children prefer football?

2

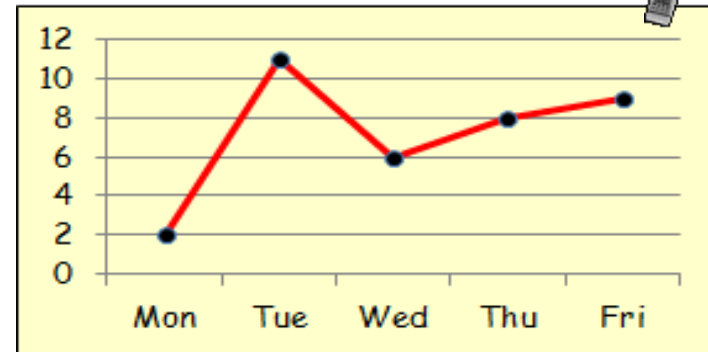


- (a) How many people chose a hotdog?
 (b) How many people chose a sandwich?

Outcome 2 - Line Graphs

1

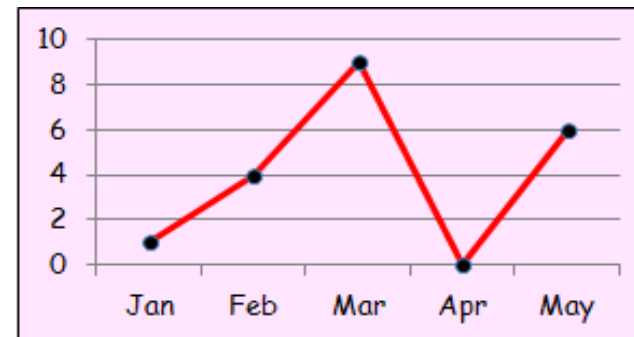
The Line Graph shows the number of hours television watched by Cari during the October week.



- (a) How much television did Cari watch on Thursday?
 (b) How much television did Cari watch on Tuesday?

2

The Line Graph shows the number of pounds Fern lost after going on a diet for her New Year's resolution.



- (a) How much weight did Fern lose in April?
 (b) How much weight did Fern lose in February?